

# Computational Geometry – Exercise

## Delaunay Triangulation


LEHRSTUHL FÜR ALGORITHMIK I · INSTITUT FÜR THEORETISCHE INFORMATIK · FAKULTÄT FÜR INFORMATIK

Guido Brückner  
15.06.2018



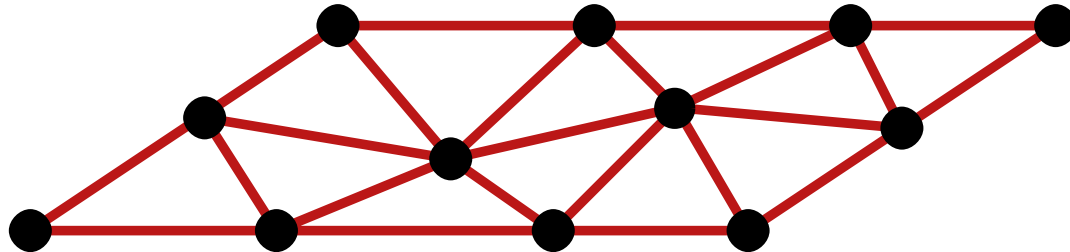
# Triangulation of a Point Set

**Def.:** A **triangulation** of a point set  $P \subset \mathbb{R}^2$  is a maximal planar subdivision with a vertex set  $P$ .



# Triangulation of a Point Set

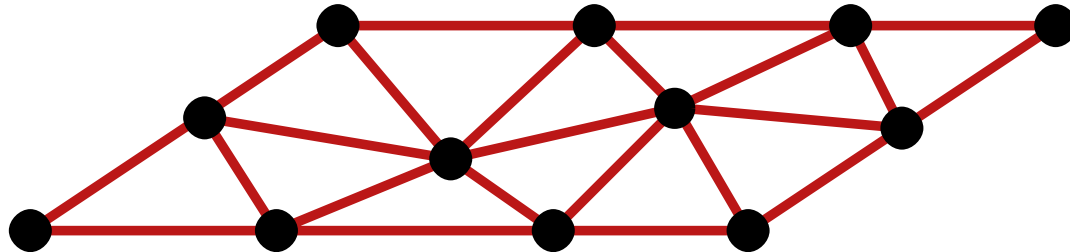
**Def.:** A **triangulation** of a point set  $P \subset \mathbb{R}^2$  is a maximal planar subdivision with a vertex set  $P$ .



**Obs.:**

# Triangulation of a Point Set

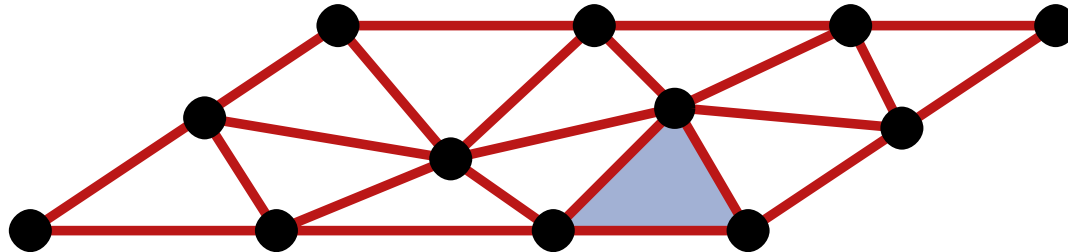
**Def.:** A **triangulation** of a point set  $P \subset \mathbb{R}^2$  is a maximal planar subdivision with a vertex set  $P$ .



**Obs.:** • all internal faces are triangles

# Triangulation of a Point Set

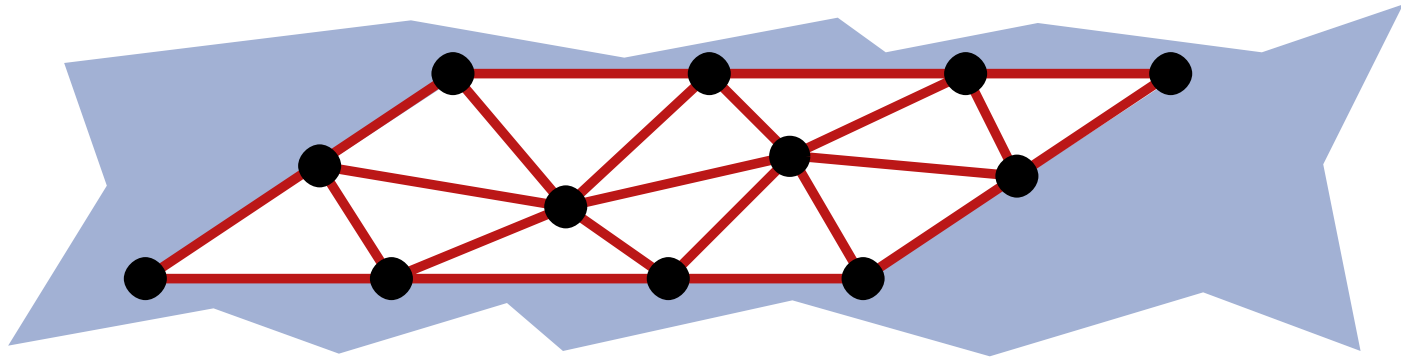
**Def.:** A **triangulation** of a point set  $P \subset \mathbb{R}^2$  is a maximal planar subdivision with a vertex set  $P$ .



**Obs.:** • all internal faces are triangles

# Triangulation of a Point Set

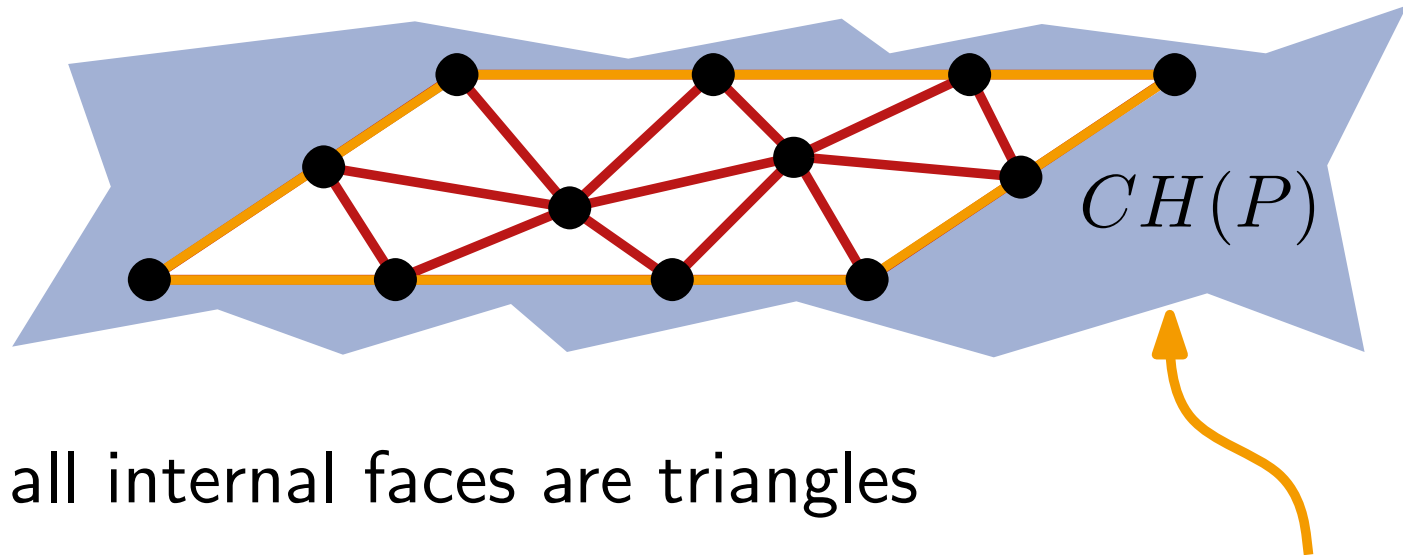
**Def.:** A **triangulation** of a point set  $P \subset \mathbb{R}^2$  is a maximal planar subdivision with a vertex set  $P$ .



- Obs.:**
- all internal faces are triangles
  - outer face is the complement of the convex hull

# Triangulation of a Point Set

**Def.:** A **triangulation** of a point set  $P \subset \mathbb{R}^2$  is a maximal planar subdivision with a vertex set  $P$ .

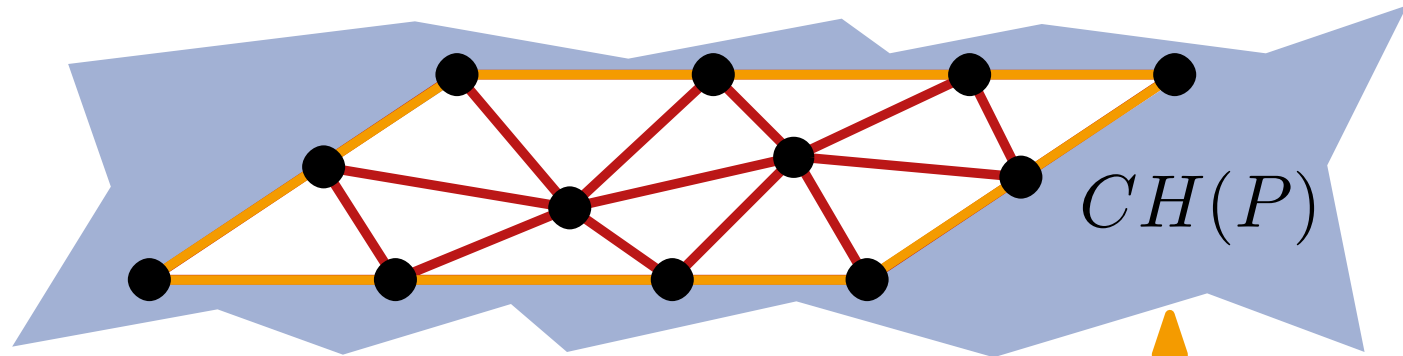


**Obs.:**

- all internal faces are triangles
- outer face is the complement of the convex hull

# Triangulation of a Point Set

**Def.:** A **triangulation** of a point set  $P \subset \mathbb{R}^2$  is a maximal planar subdivision with a vertex set  $P$ .



**Obs.:**

- all internal faces are triangles
- outer face is the complement of the convex hull

**Theorem 1:** Let  $P$  be a set of  $n$  points, not all collinear. Let  $h$  be the number of points in  $CH(P)$ .

Then any triangulation of  $P$  has  $(2n - 2 - h)$  triangles and  $(3n - 3 - h)$  edges.



# Exercise 5

## Problem:

Let  $P \subset \mathbb{R}^2$  be a set of  $n$  points.

- a) There are at most  $2^{\binom{n}{2}}$  triangulations of  $P$ .
- b) Example:  $P$  such that for each triangulation there is at least one point having degree  $n - 1$ .

# Exercise 5

## Problem:

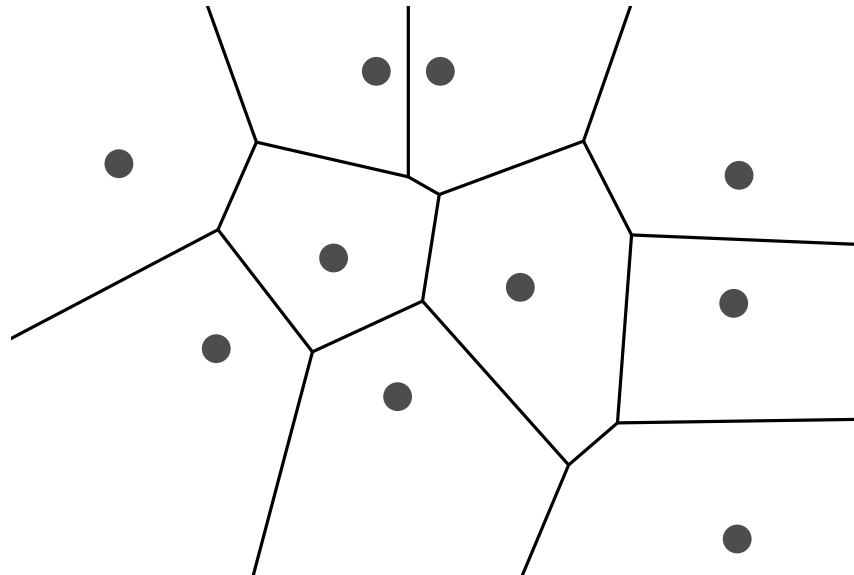
Let  $P \subset \mathbb{R}^2$  be a set of  $n$  points.

- a) There are at most  $2^{\binom{n}{2}}$  triangulations of  $P$ .
- b) Example:  $P$  such that for each triangulation there is at least one point having degree  $n - 1$ .

# Delaunay-Triangulation

Let  $\text{Vor}(P)$  be the Voronoi-Diagram of a point set  $P$ .

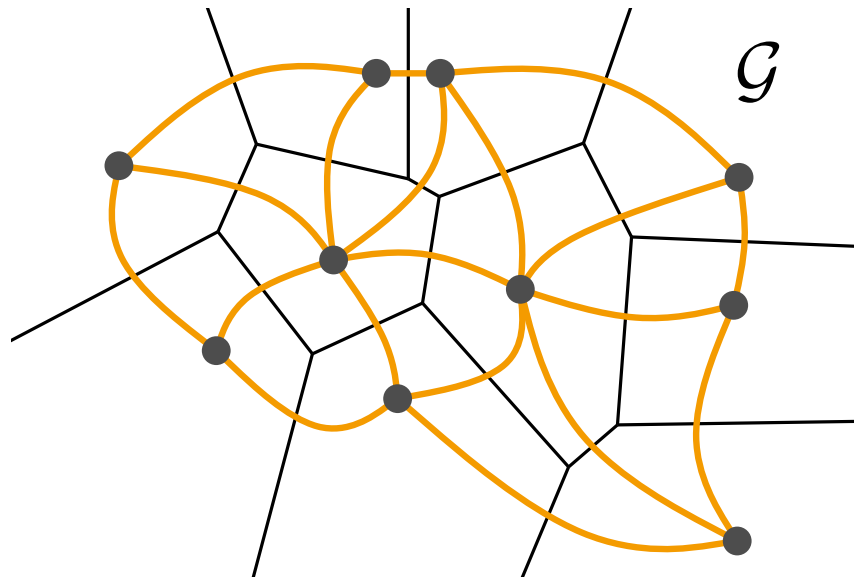
**Def.:** The graph  $\mathcal{G} = (P, E)$  with  
 $E = \{pq \mid \mathcal{V}(p) \text{ and } \mathcal{V}(q) \text{ are adjacent}\}$   
is called **dual graph** of  $\text{Vor}(P)$ .



# Delaunay-Triangulation

Let  $\text{Vor}(P)$  be the Voronoi-Diagram of a point set  $P$ .

**Def.:** The graph  $\mathcal{G} = (P, E)$  with  
 $E = \{pq \mid \mathcal{V}(p) \text{ and } \mathcal{V}(q) \text{ are adjacent}\}$   
is called **dual graph** of  $\text{Vor}(P)$ .

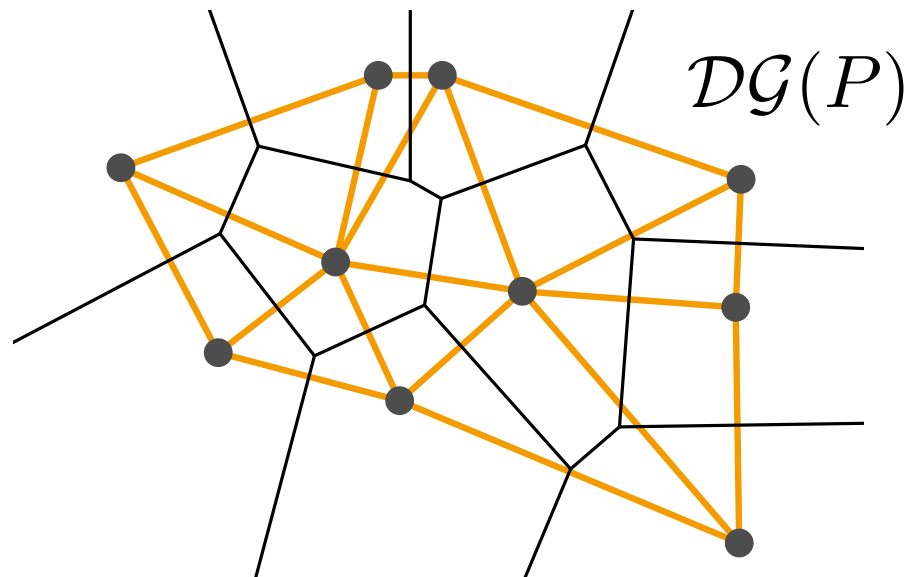


# Delaunay-Triangulation

Let  $\text{Vor}(P)$  be the Voronoi-Diagram of a point set  $P$ .

**Def.:** The graph  $\mathcal{G} = (P, E)$  with  
 $E = \{pq \mid \mathcal{V}(p) \text{ and } \mathcal{V}(q) \text{ are adjacent}\}$   
is called **dual graph** of  $\text{Vor}(P)$ .

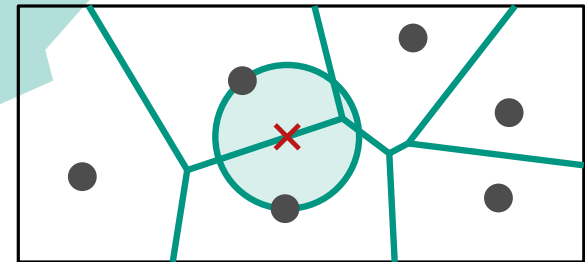
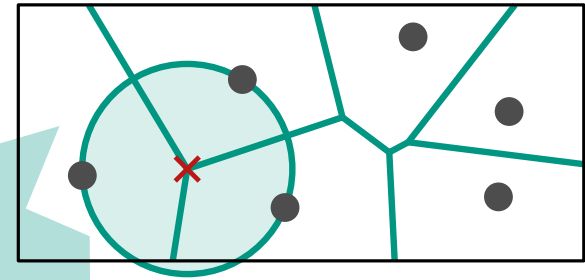
**Def.:** The straight-line drawing of  $\mathcal{G}$  is called  
**Delaunay-Graph**  $\mathcal{DG}(P)$ .



# Characterization

## Theorem about Voronoi-Diagram:

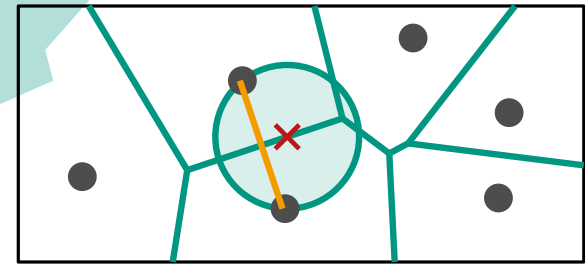
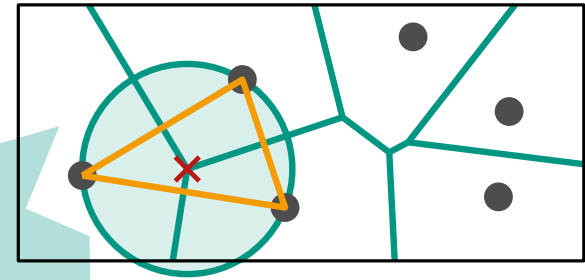
- point  $q$  is a Voronoy-vertex  
 $\Leftrightarrow |C_P(q) \cap P| \geq 3,$
- bisector  $b(p_i, p_j)$  defines a Voronoi-edge  
 $\Leftrightarrow \exists q \in b(p_i, p_j)$  with  $C_P(q) \cap P = \{p_i, p_j\}.$



# Characterization

## Theorem about Voronoi-Diagram:

- point  $q$  is a Voronoi-vertex  
 $\Leftrightarrow |C_P(q) \cap P| \geq 3$ ,
- bisector  $b(p_i, p_j)$  defines a Voronoi-edge  
 $\Leftrightarrow \exists q \in b(p_i, p_j)$  with  $C_P(q) \cap P = \{p_i, p_j\}$ .



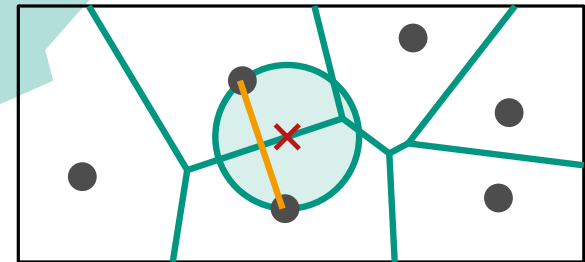
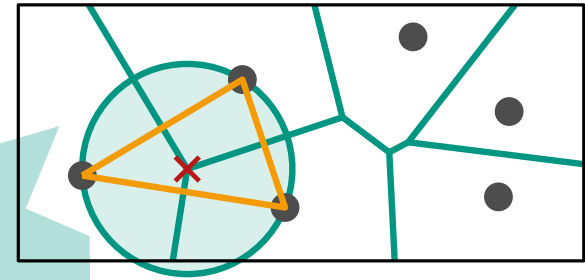
## Theorem 4: Let $P$ be a set of points.

- Points  $p, q, r$  are vertices of the same face of  $\mathcal{DG}(P) \Leftrightarrow$   
circle through  $p, q, r$  is empty
- Edge  $pq$  is in  $\mathcal{DG}(P) \Leftrightarrow$   
there is an empty circle  $C_{p,q}$  through  $p$  and  $q$

# Characterization

## Theorem about Voronoi-Diagram:

- point  $q$  is a Voronoi-vertex  
 $\Leftrightarrow |C_P(q) \cap P| \geq 3$ ,
- bisector  $b(p_i, p_j)$  defines a Voronoi-edge  
 $\Leftrightarrow \exists q \in b(p_i, p_j)$  with  $C_P(q) \cap P = \{p_i, p_j\}$ .



## Theorem 4: Let $P$ be a set of points.

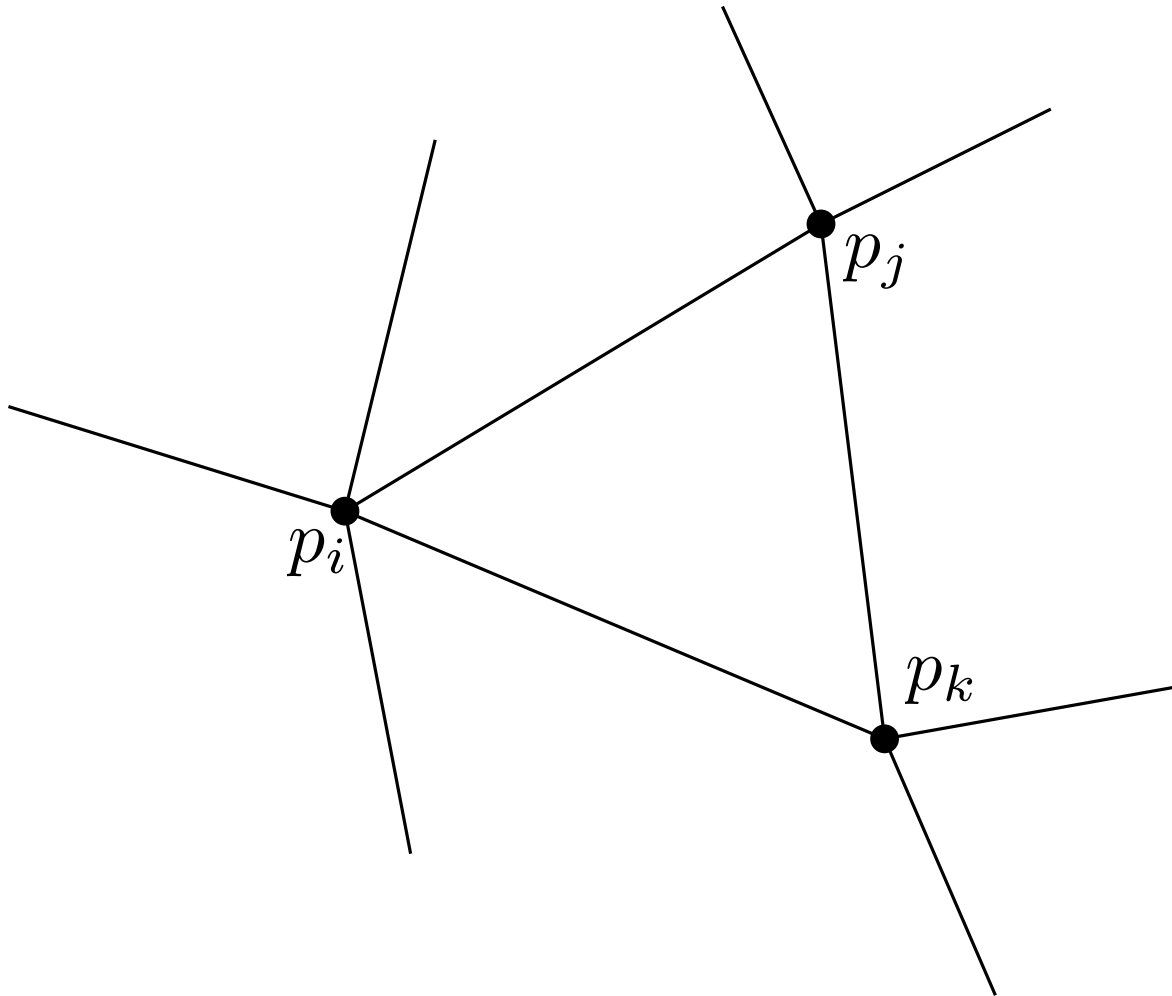
- Points  $p, q, r$  are vertices of the same face of  $\mathcal{DG}(P) \Leftrightarrow$   
circle through  $p, q, r$  is empty
- Edge  $pq$  is in  $\mathcal{DG}(P) \Leftrightarrow$   
there is an empty circle  $C_{p,q}$  through  $p$  and  $q$

**Theorem 5:** Let  $P$  be a set of points and let  $\mathcal{T}$  be a triangulation of  $P$ .  $\mathcal{T}$  is Delaunay-Triangulation  
 $\Leftrightarrow$  the circumcircle of each triangle has an empty interior.



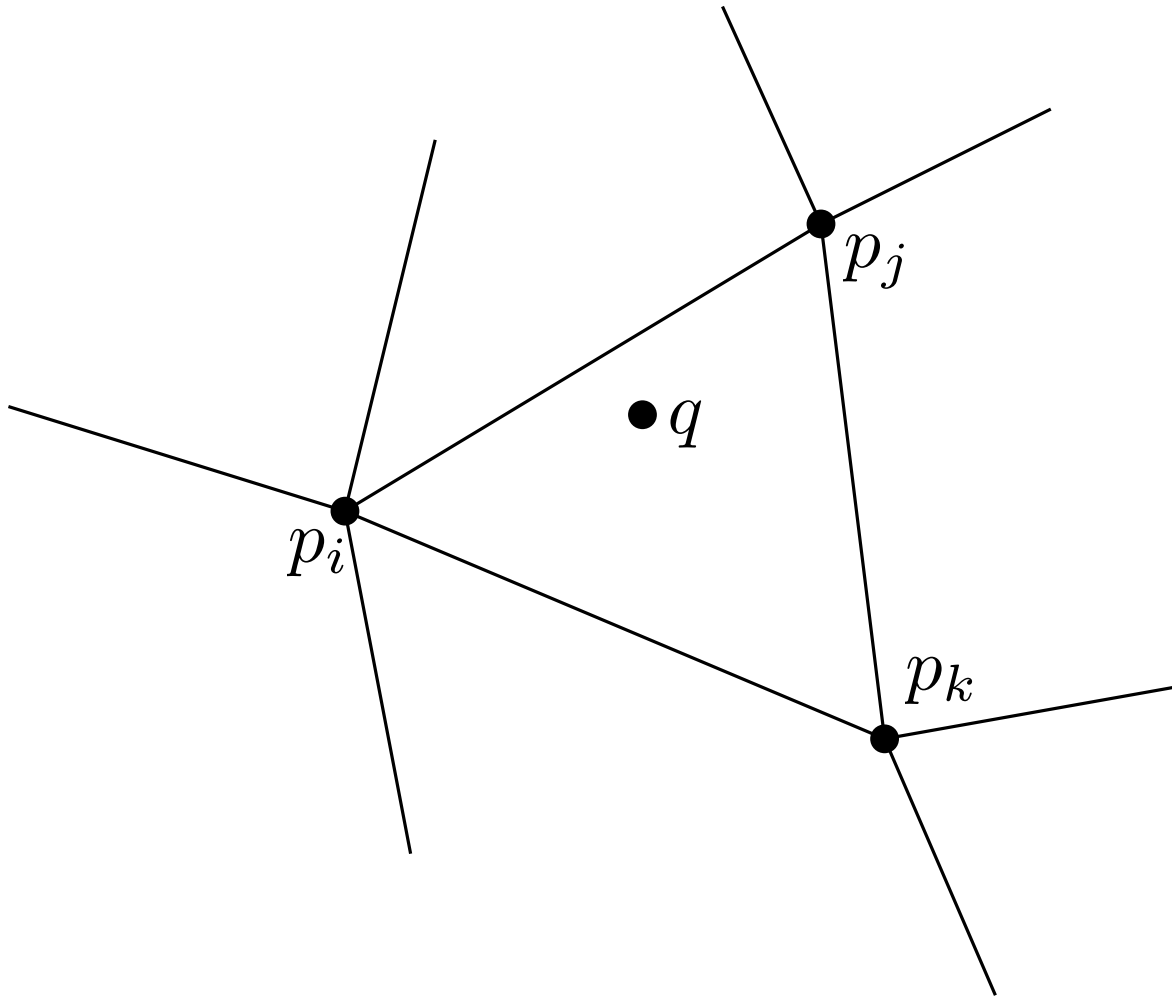
## Exercise 6

- Given:**
- Points  $P \subset \mathbb{R}^2$  in general position.
  - $q \notin P$  in convex hull of  $P$ .



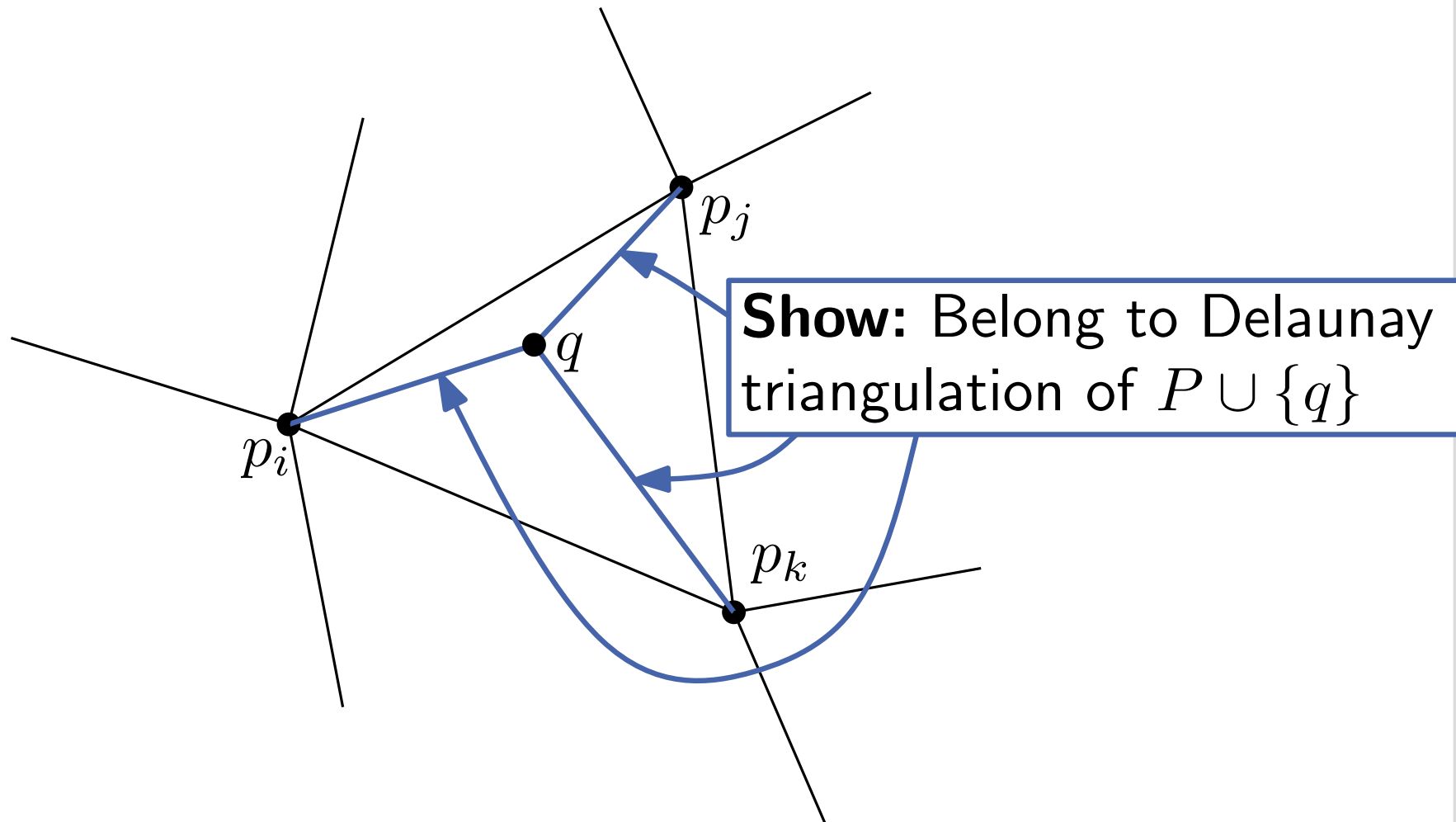
## Exercise 6

- Given:**
- Points  $P \subset \mathbb{R}^2$  in general position.
  - $q \notin P$  in convex hull of  $P$ .



## Exercise 6

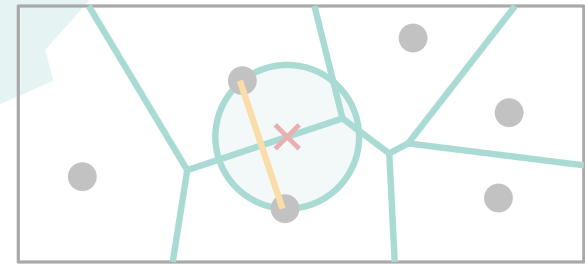
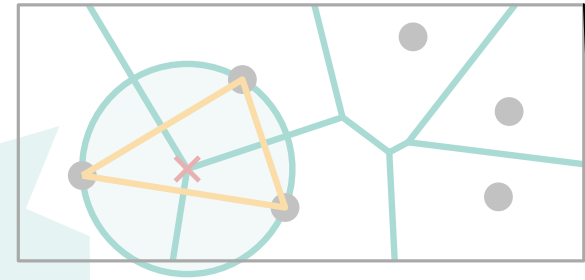
- Given:**
- Points  $P \subset \mathbb{R}^2$  in general position.
  - $q \notin P$  in convex hull of  $P$ .



# Characterization

## Theorem about Voronoi-Diagram:

- point  $q$  is a Voronoi-vertex  
 $\Leftrightarrow |C_P(q) \cap P| \geq 3$ ,
- bisector  $b(p_i, p_j)$  defines a Voronoi-edge  
 $\Leftrightarrow \exists q \in b(p_i, p_j)$  with  $C_P(q) \cap P = \{p_i, p_j\}$ .



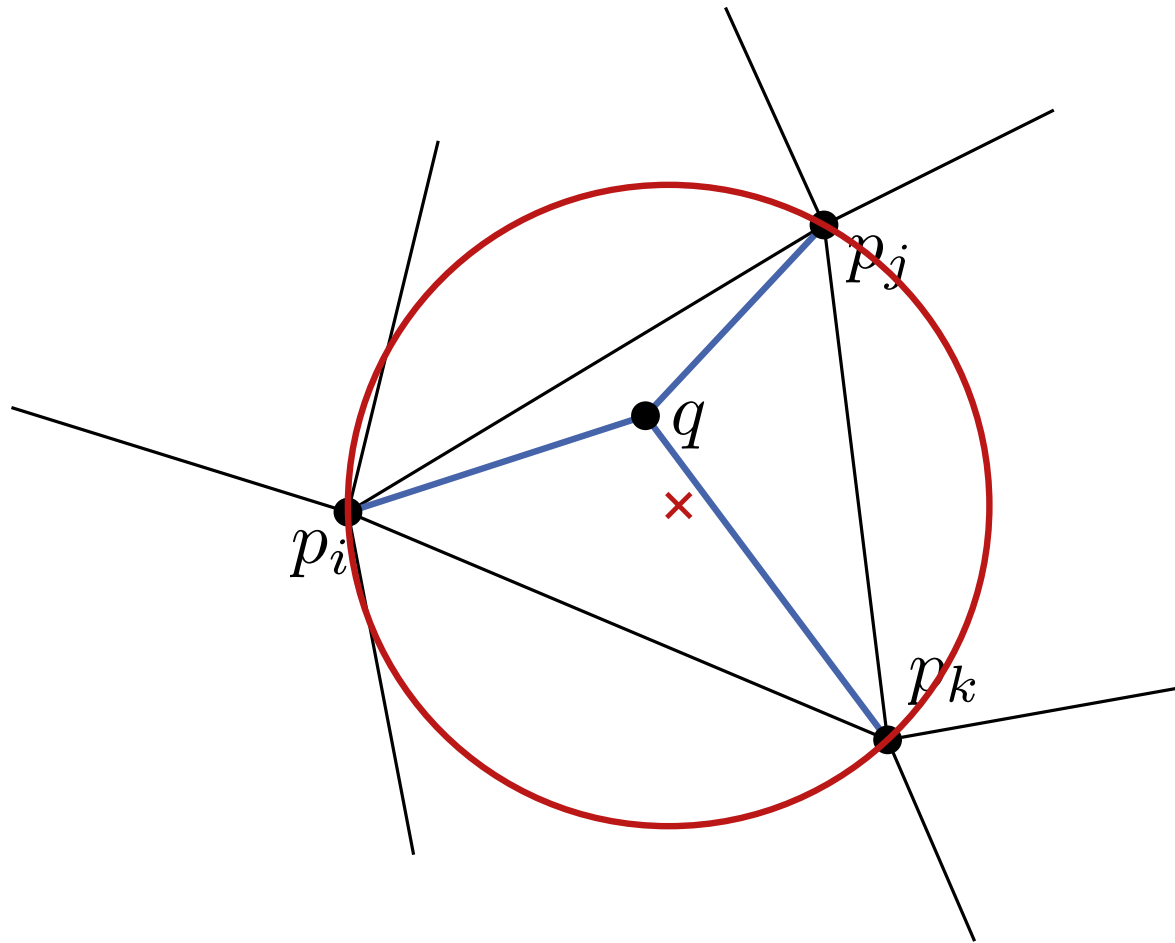
## Theorem 4: Let $P$ be a set of points.

- Points  $p, q, r$  are vertices of the same face of  $\mathcal{DG}(P) \Leftrightarrow$   
circle through  $p, q, r$  is empty
- Edge  $pq$  is in  $\mathcal{DG}(P) \Leftrightarrow$   
there is an empty circle  $C_{p,q}$  through  $p$  and  $q$

**Theorem 5:** Let  $P$  be a set of points and let  $\mathcal{T}$  be a triangulation of  $P$ .  $\mathcal{T}$  is Delaunay-Triangulation  
 $\Leftrightarrow$  the circumcircle of each triangle has an empty interior.

## Exercise 2

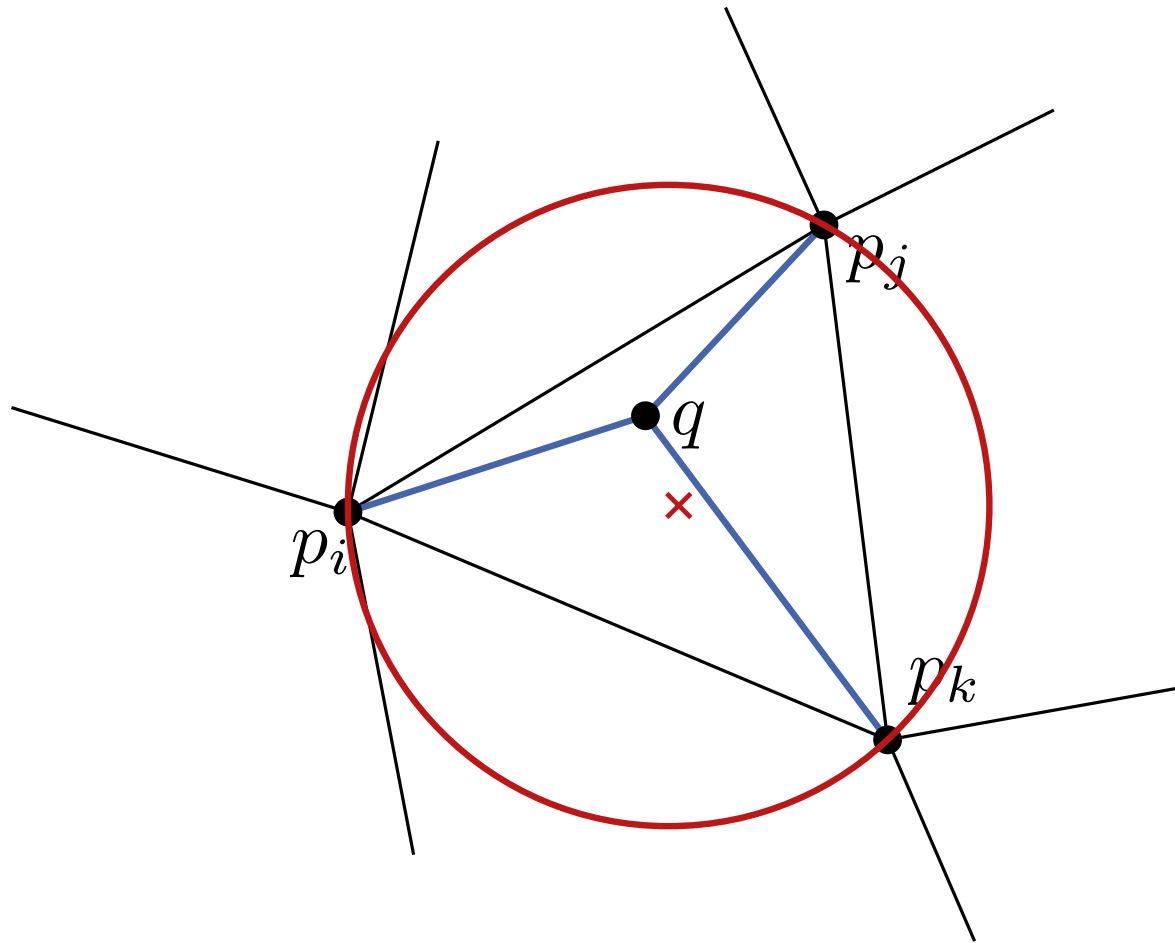
- Given:**
- Points  $P \subset \mathbb{R}^2$  in general position.
  - $q \notin P$  in convex hull of  $P$ .



Edge  $pq$  in  $\mathcal{DG}(P) \Leftrightarrow$  there is empty circles  $C_{p,q}$  through  $p$  and  $q$

## Exercise 2

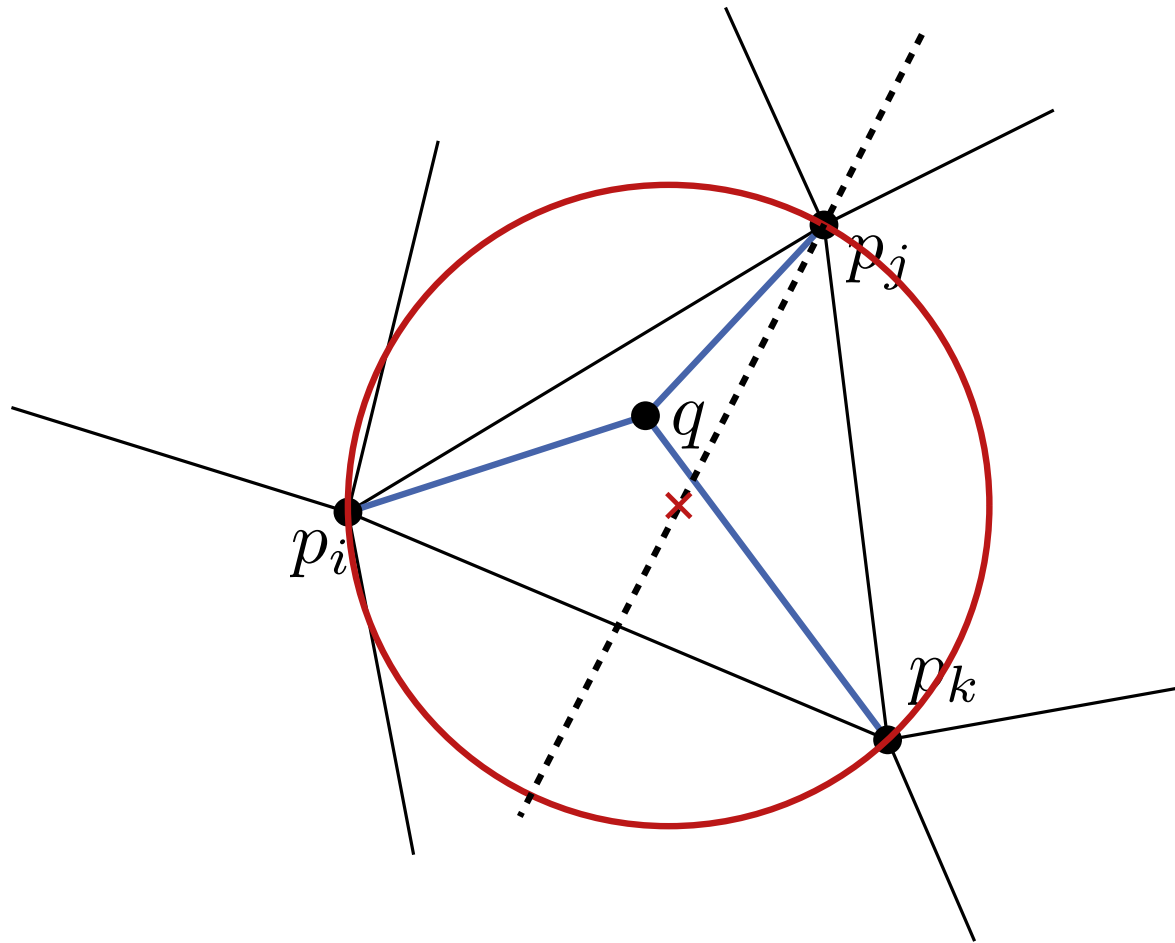
- Given:**
- Points  $P \subset \mathbb{R}^2$  in general position.
  - $q \notin P$  in convex hull of  $P$ .



Edge  $pq$  in  $\mathcal{DG}(P) \Leftrightarrow$  there is empty circles  $C_{p,q}$  through  $p$  and  $q$

## Exercise 2

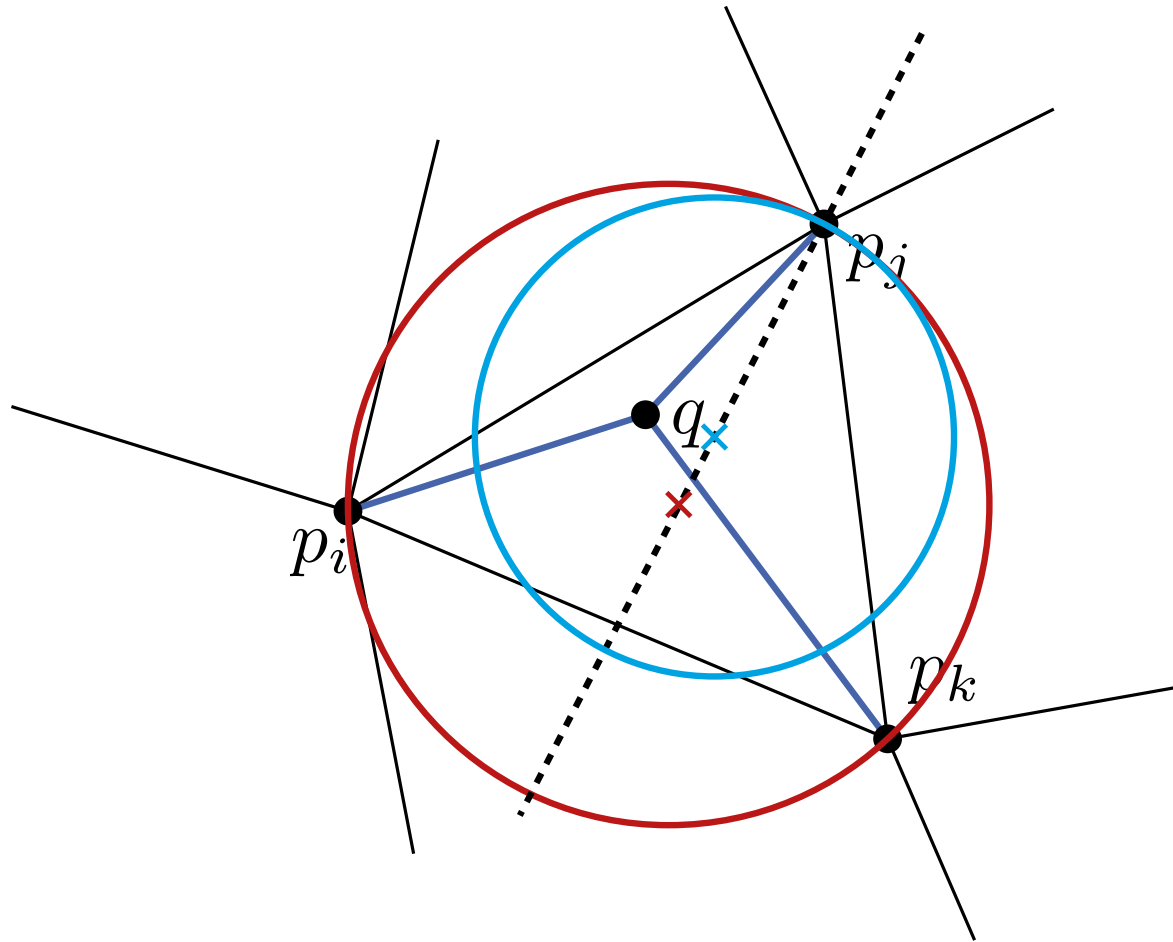
- Given:**
- Points  $P \subset \mathbb{R}^2$  in general position.
  - $q \notin P$  in convex hull of  $P$ .



Edge  $pq$  in  $\mathcal{DG}(P) \Leftrightarrow$  there is empty circles  $C_{p,q}$  through  $p$  and  $q$

## Exercise 2

- Given:**
- Points  $P \subset \mathbb{R}^2$  in general position.
  - $q \notin P$  in convex hull of  $P$ .

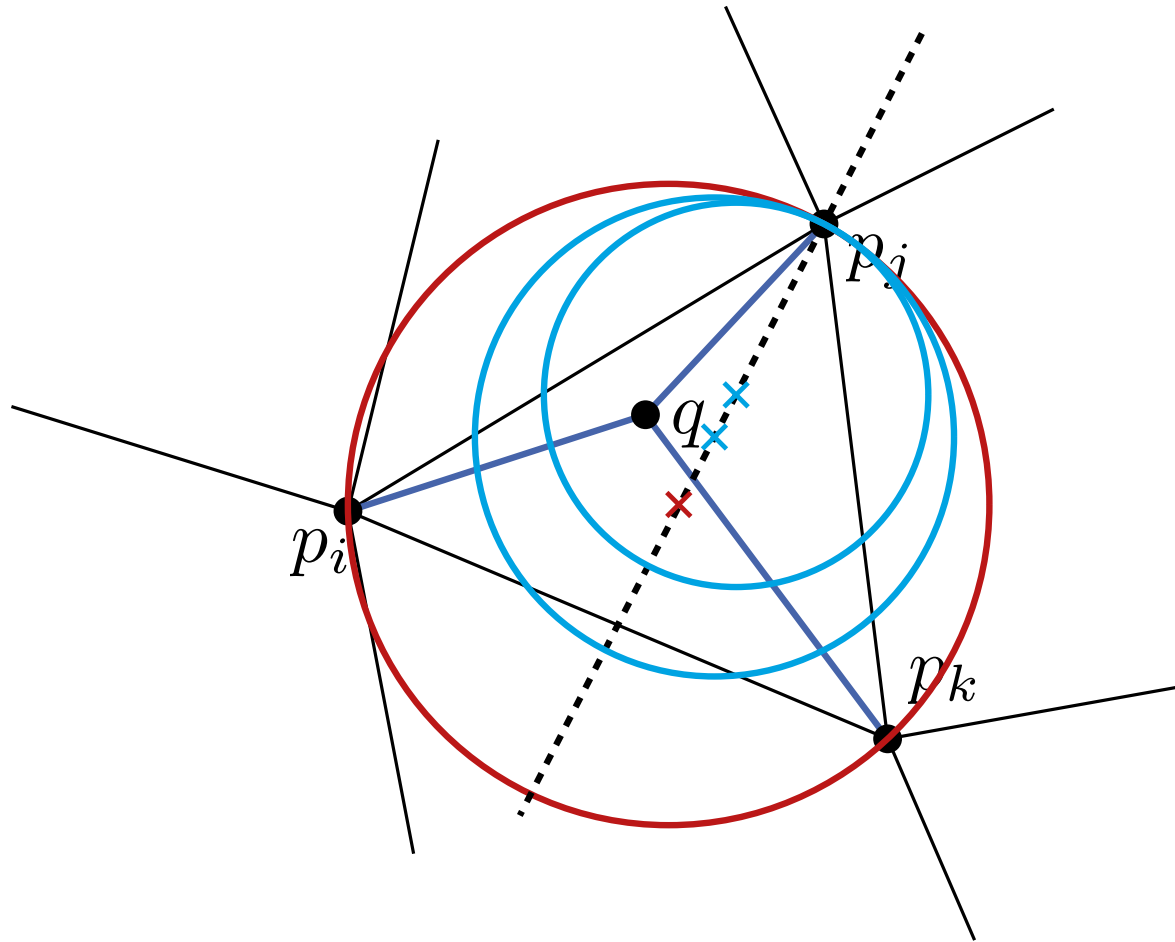


Edge  $pq$  in  $\mathcal{DG}(P) \Leftrightarrow$  there is empty circles  $C_{p,q}$  through  $p$  and  $q$



## Exercise 2

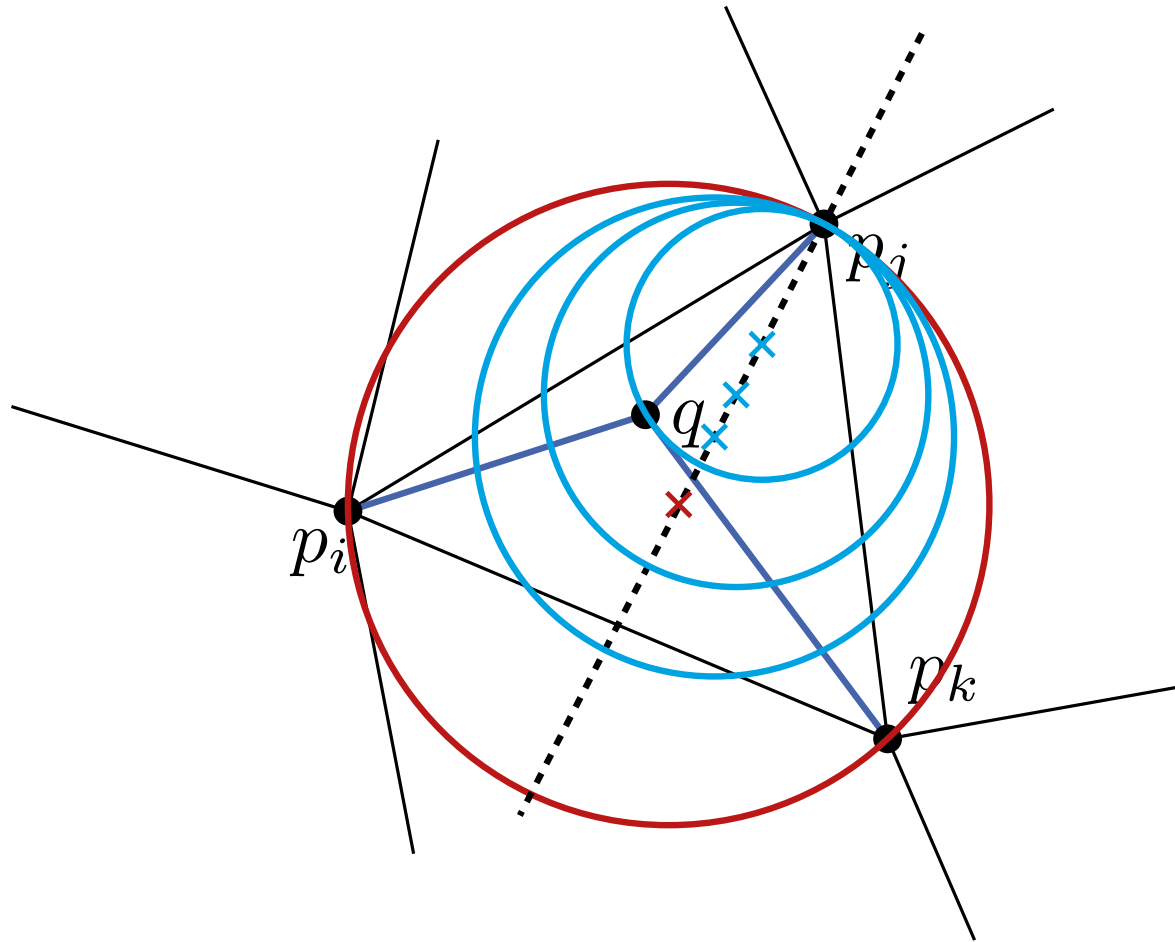
- Given:**
- Points  $P \subset \mathbb{R}^2$  in general position.
  - $q \notin P$  in convex hull of  $P$ .



Edge  $pq$  in  $\mathcal{DG}(P) \Leftrightarrow$  there is empty circles  $C_{p,q}$  through  $p$  and  $q$

## Exercise 2

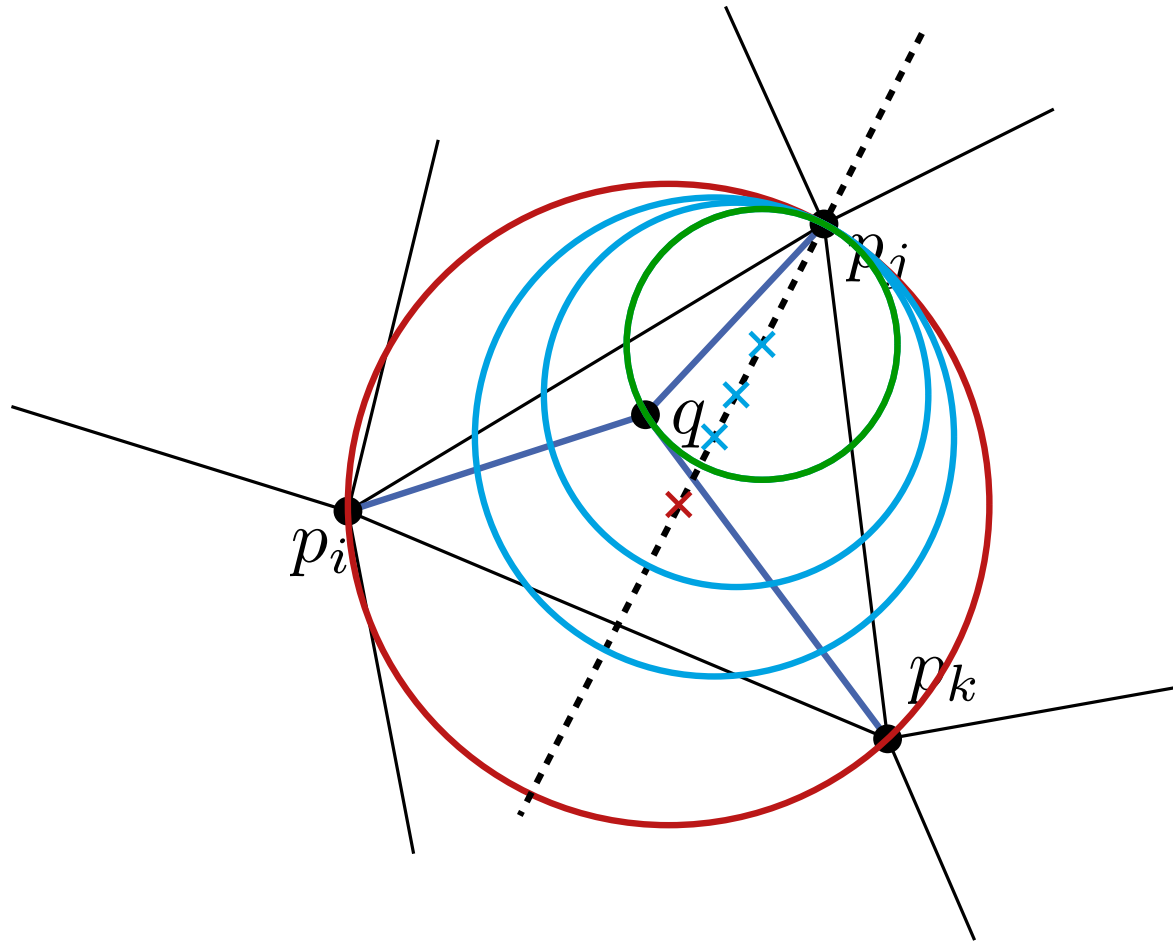
- Given:**
- Points  $P \subset \mathbb{R}^2$  in general position.
  - $q \notin P$  in convex hull of  $P$ .



Edge  $pq$  in  $\mathcal{DG}(P) \Leftrightarrow$  there is empty circles  $C_{p,q}$  through  $p$  and  $q$

## Exercise 2

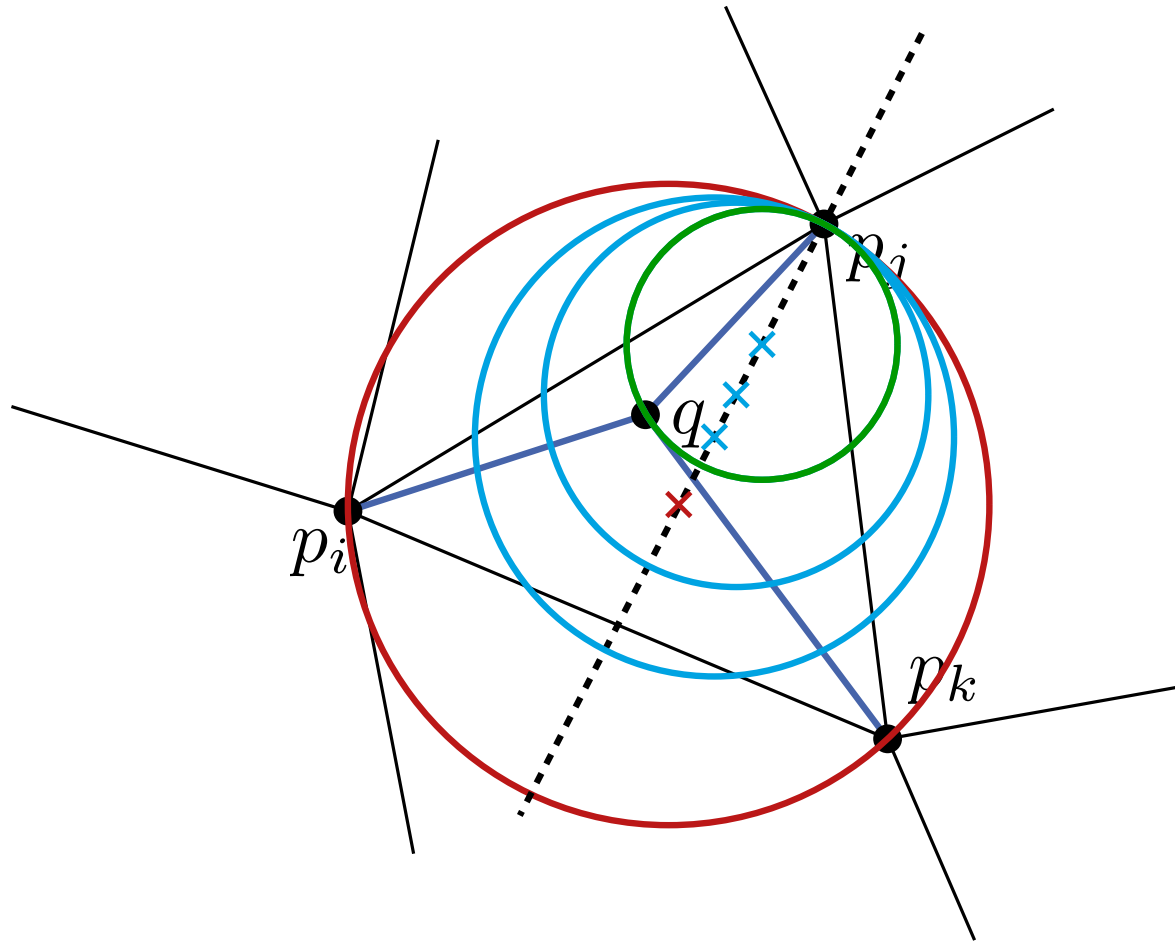
- Given:**
- Points  $P \subset \mathbb{R}^2$  in general position.
  - $q \notin P$  in convex hull of  $P$ .



Edge  $pq$  in  $\mathcal{DG}(P) \Leftrightarrow$  there is empty circles  $C_{p,q}$  through  $p$  and  $q$

## Exercise 2


- Given:**
- Points  $P \subset \mathbb{R}^2$  in general position.
  - $q \notin P$  in convex hull of  $P$ .



Edge  $pq$  in  $\mathcal{DG}(P) \Leftrightarrow$  there is empty circles  $C_{p,q}$  through  $p$  and  $q$

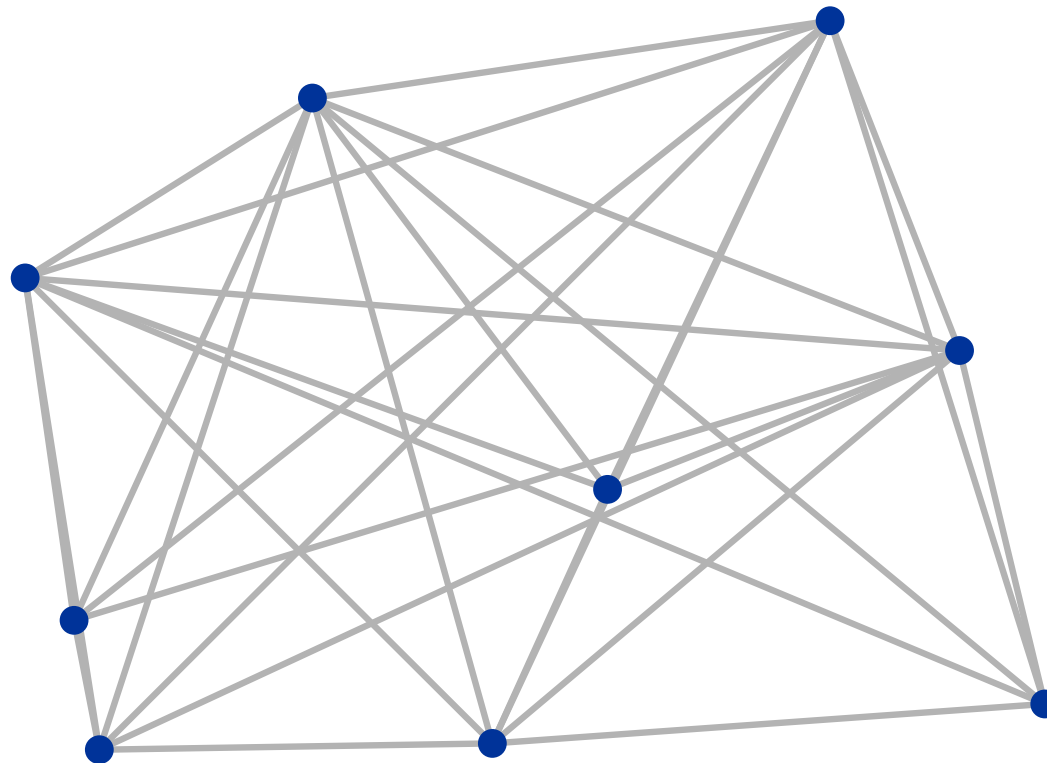
# Exercise 3

## Euclidean Minimum Spanning Tree



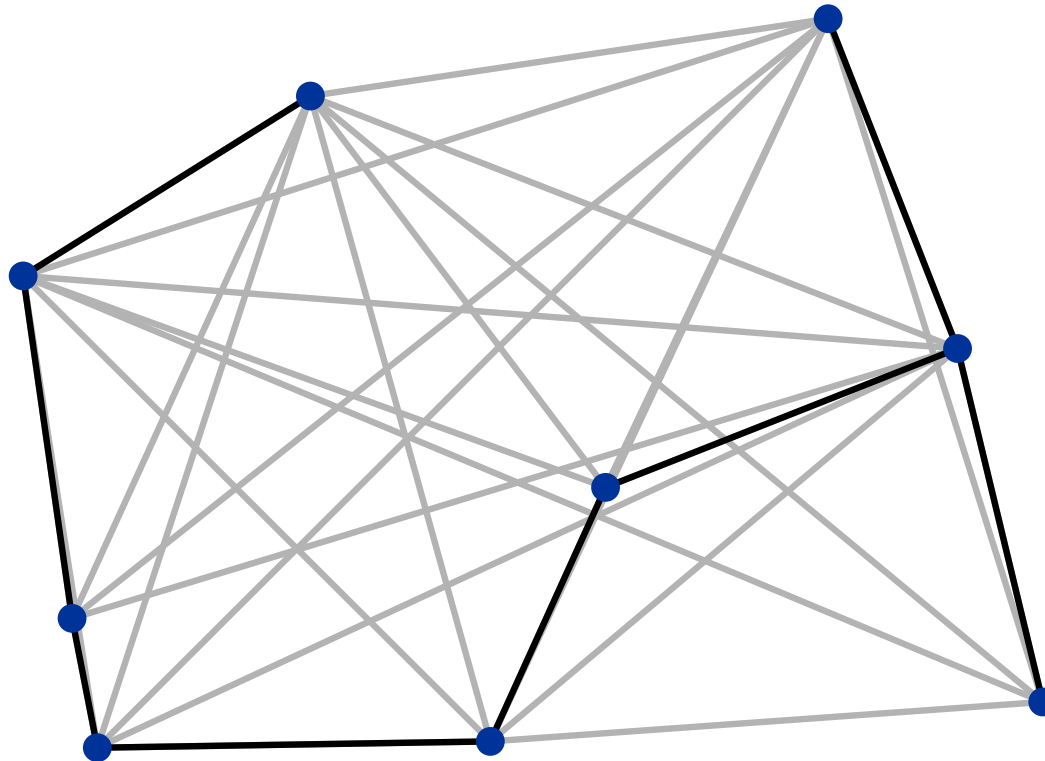
# Exercise 3

## Euclidean Minimum Spanning Tree




# Exercise 3

## Euclidean Minimum Spanning Tree



# Exercise 3

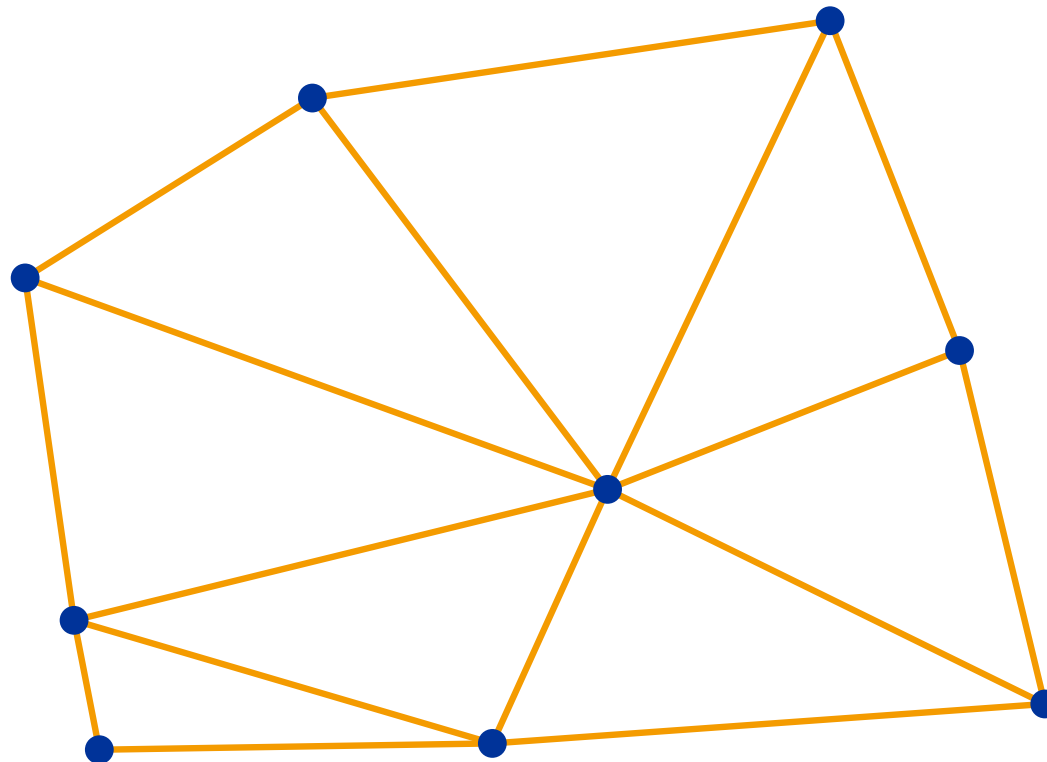
## Euclidean Minimum Spanning Tree





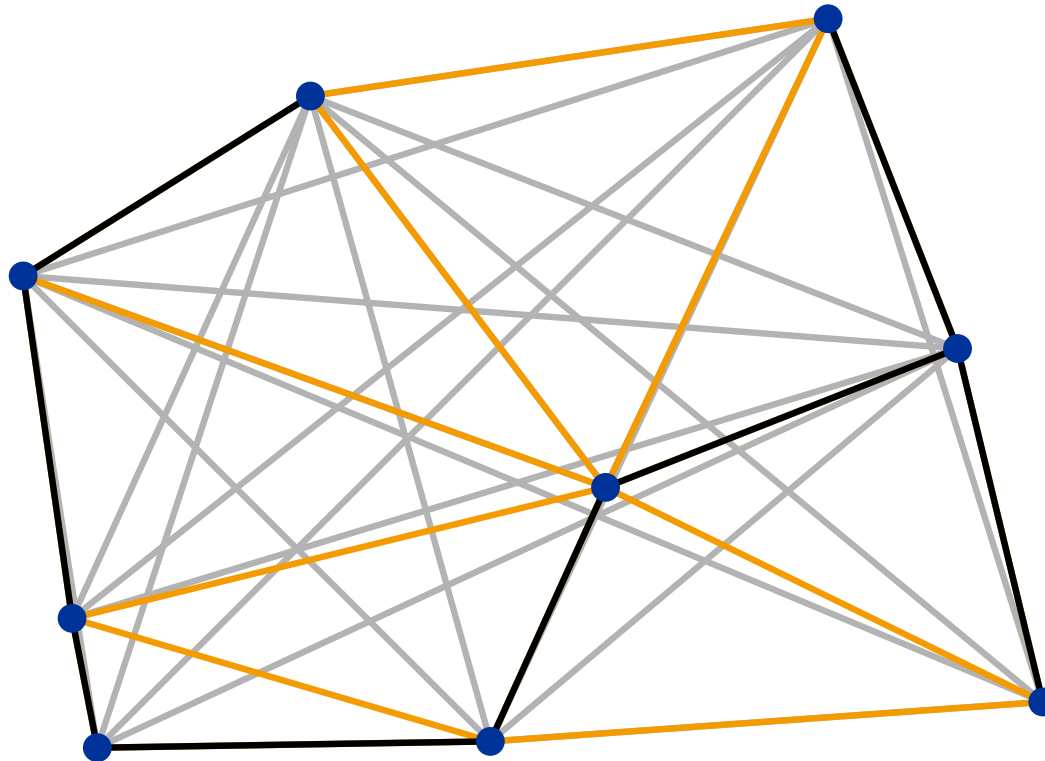
# Exercise 3

## Euclidean Minimum Spanning Tree



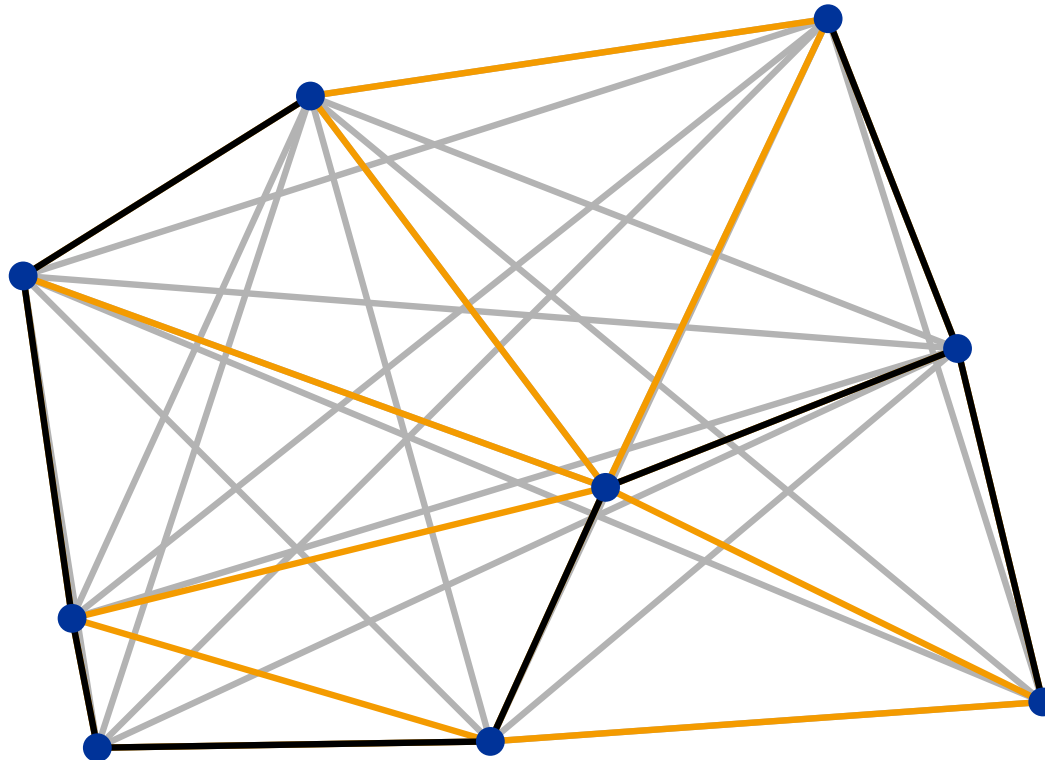
# Exercise 3

## Euclidean Minimum Spanning Tree



# Exercise 3

## Euclidean Minimum Spanning Tree

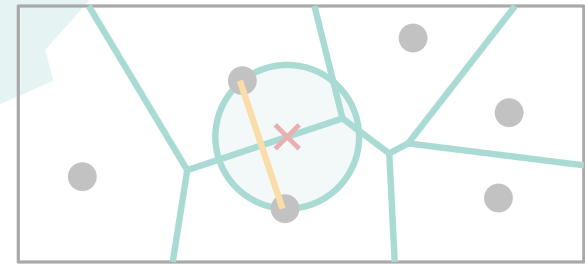
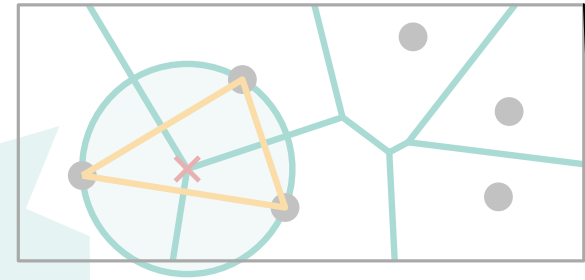


Show that edges of EMST form subset of the edges of the Delaunay-Graph

# Characterization

## Theorem about Voronoi-Diagram:

- point  $q$  is a Voronoi-vertex  
 $\Leftrightarrow |C_P(q) \cap P| \geq 3,$
- bisector  $b(p_i, p_j)$  defines a Voronoi-edge  
 $\Leftrightarrow \exists q \in b(p_i, p_j)$  with  $C_P(q) \cap P = \{p_i, p_j\}.$

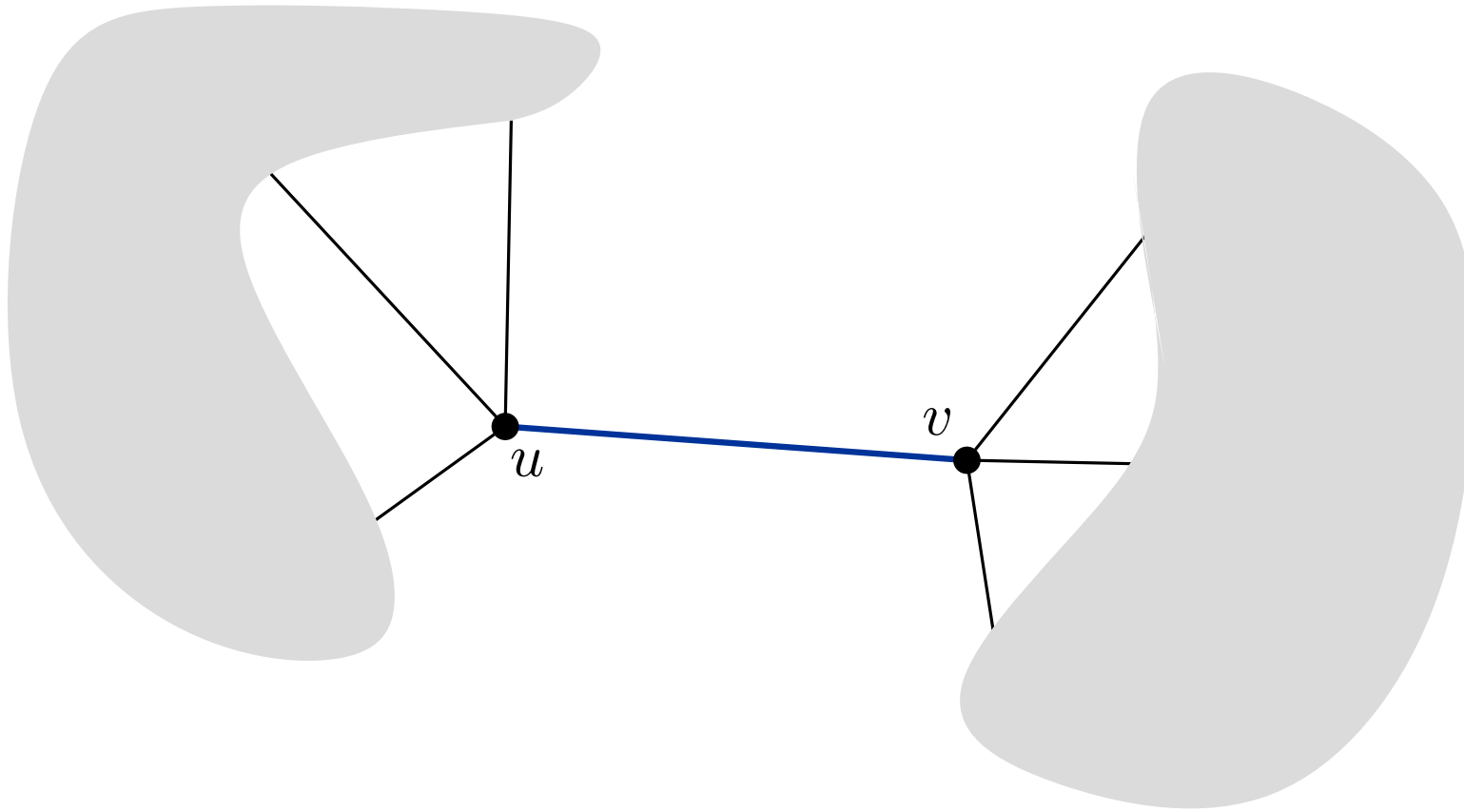


## Theorem 4: Let $P$ be a set of points.

- Points  $p, q, r$  are vertices of the same face of  $\mathcal{DG}(P) \Leftrightarrow$   
circle through  $p, q, r$  is empty
- Edge  $pq$  is in  $\mathcal{DG}(P) \Leftrightarrow$   
there is an empty circle  $C_{p,q}$  through  $p$  and  $q$

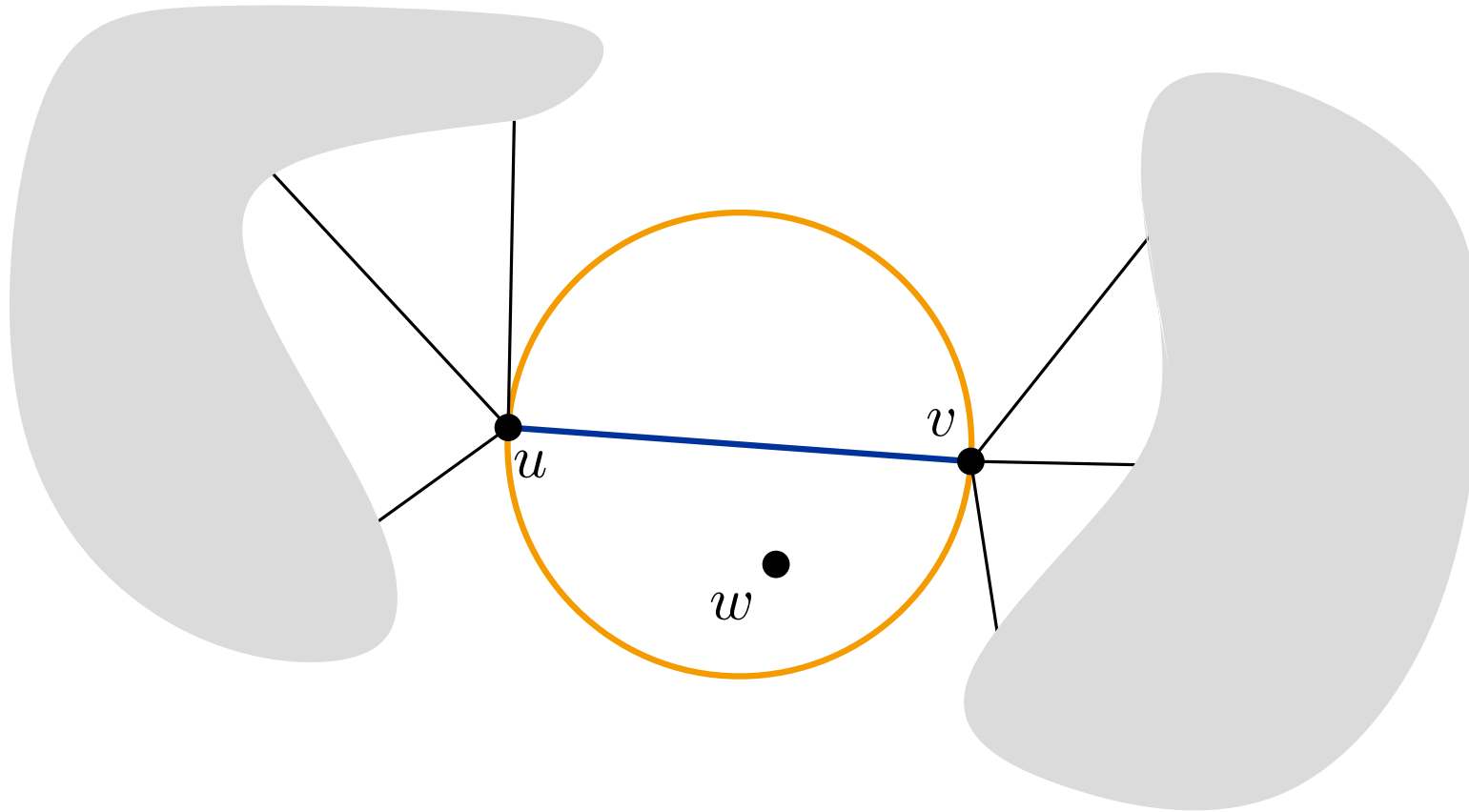
**Theorem 5:** Let  $P$  be a set of points and let  $\mathcal{T}$  be a triangulation of  $P$ .  $\mathcal{T}$  is Delaunay-Triangulation  
 $\Leftrightarrow$  the circumcircle of each triangle has an empty interior.

# Exercise 3



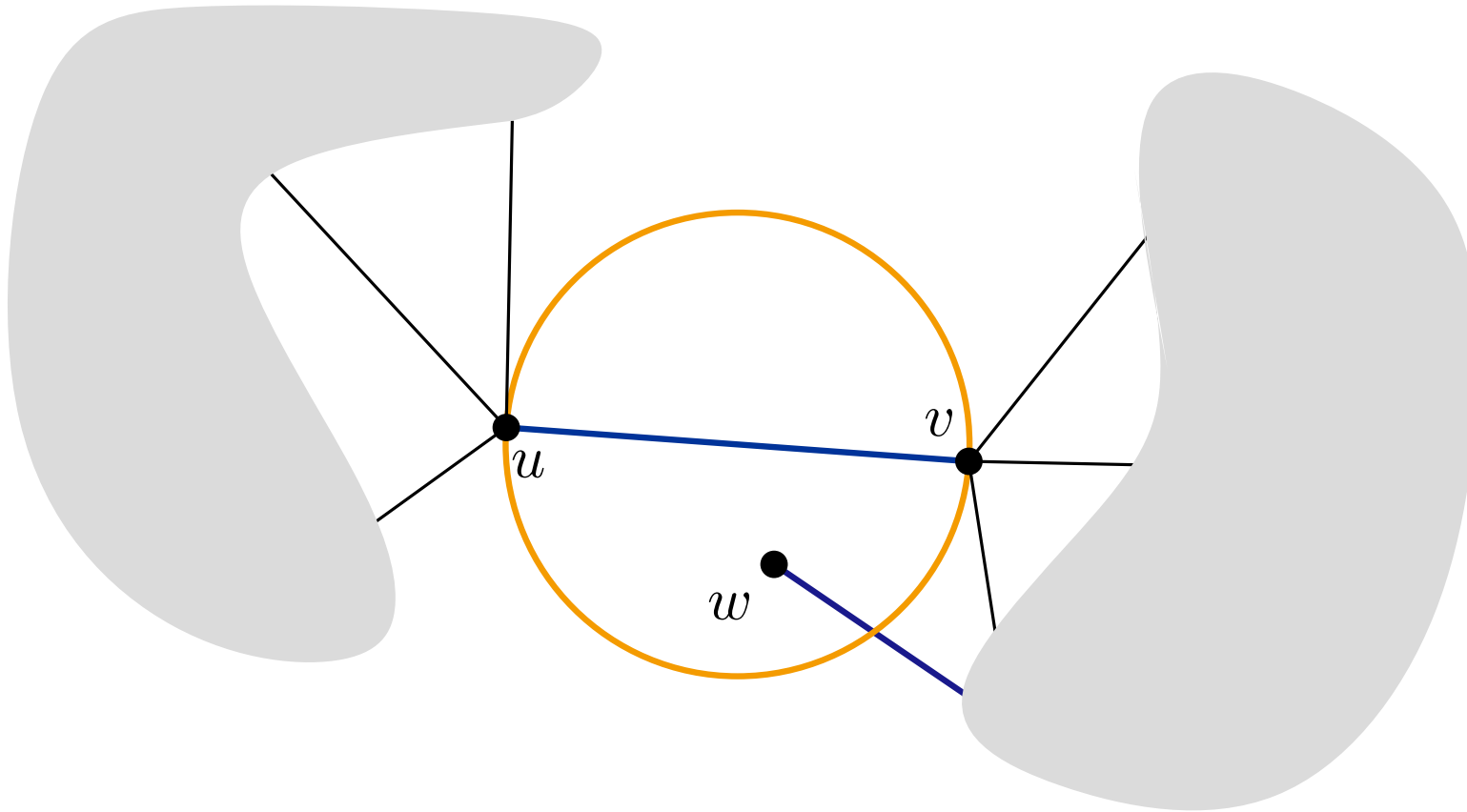
Edge  $pq$  in  $\mathcal{DG}(P) \Leftrightarrow$  there is empty circle  $C_{p,q}$  through  $p$  and  $q$

# Exercise 3



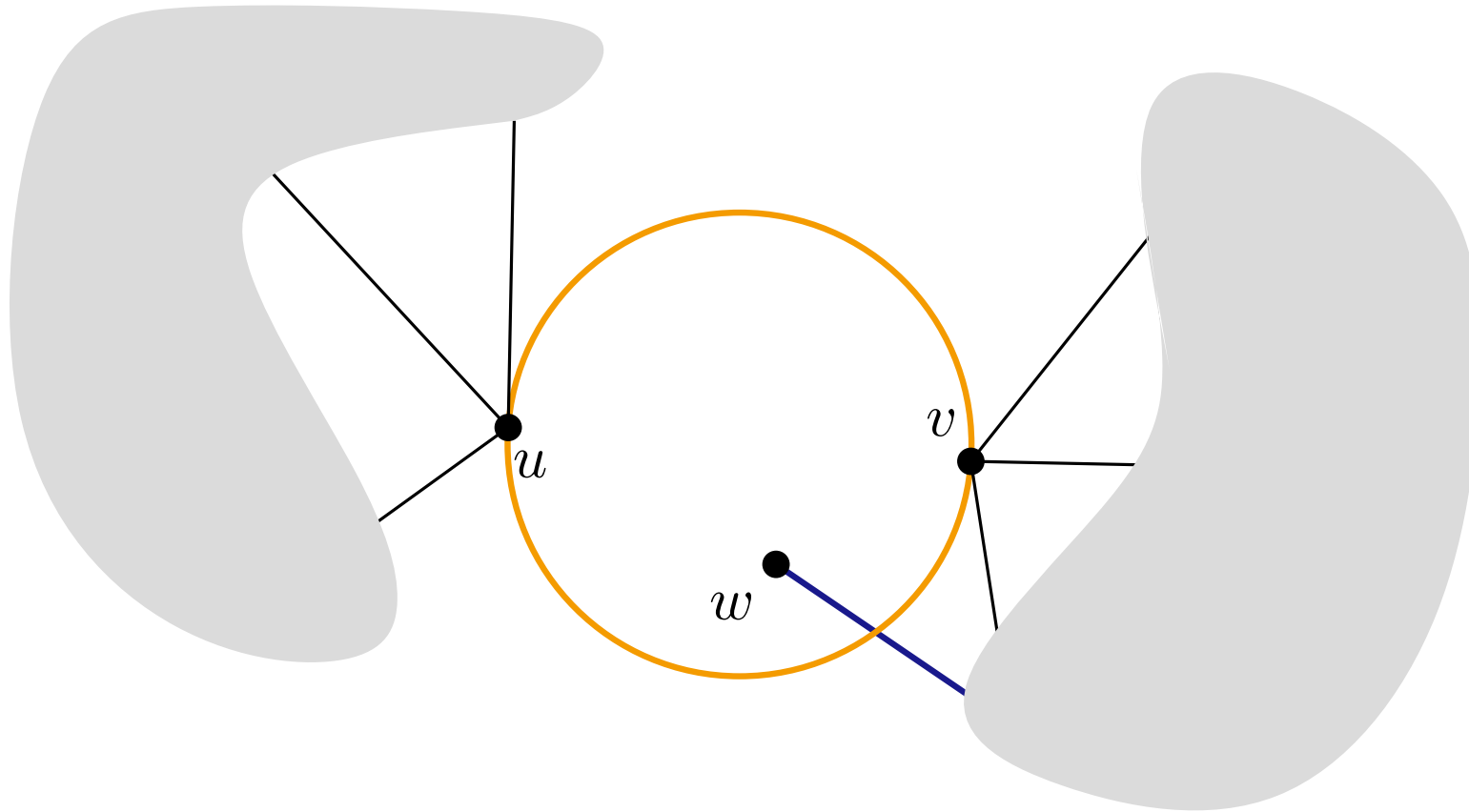
Edge  $pq$  in  $\mathcal{DG}(P) \Leftrightarrow$  there is empty circle  $C_{p,q}$  through  $p$  and  $q$

# Exercise 3



Edge  $pq$  in  $\mathcal{DG}(P) \Leftrightarrow$  there is empty circle  $C_{p,q}$  through  $p$  and  $q$

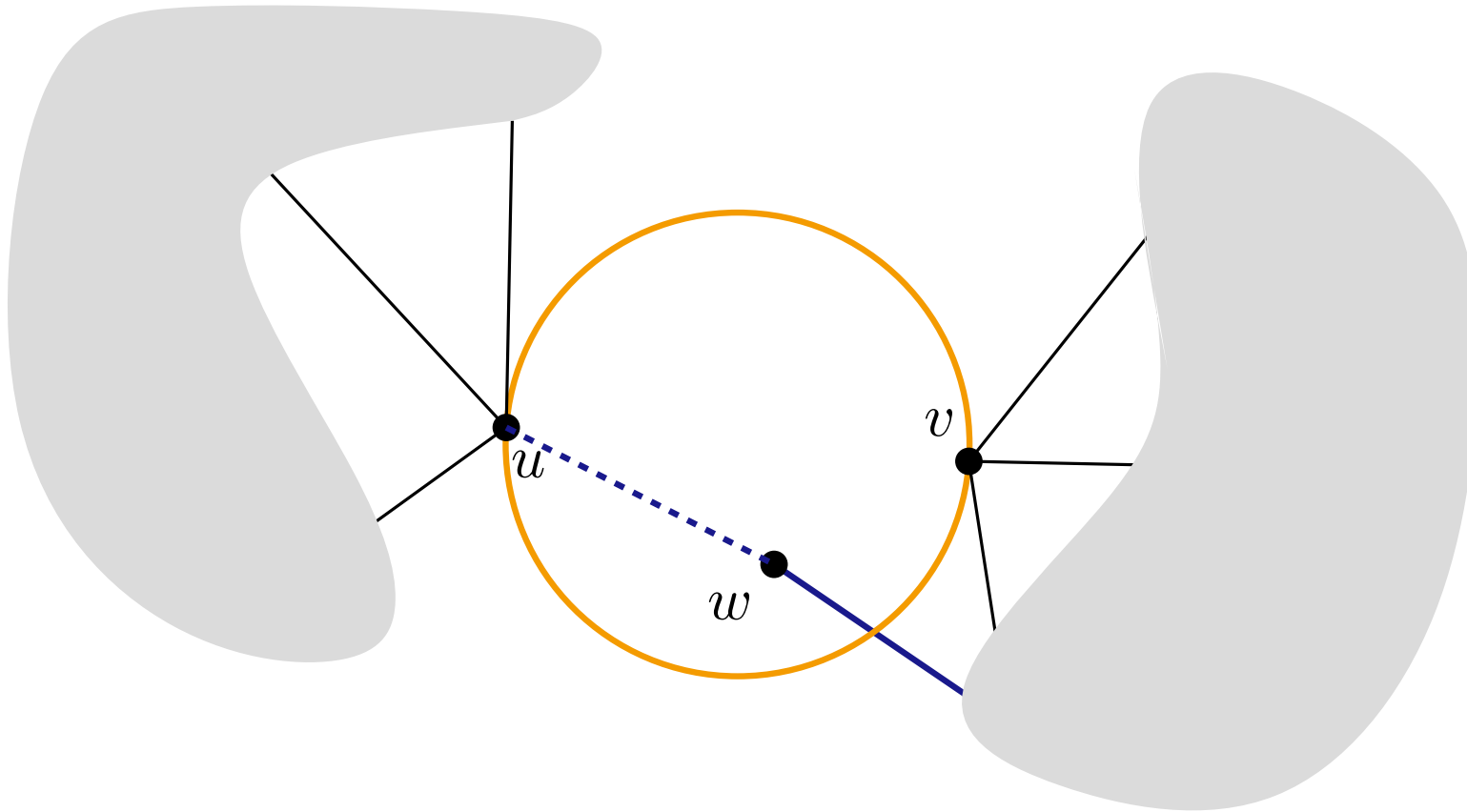
# Exercise 3



Edge  $pq$  in  $\mathcal{DG}(P) \Leftrightarrow$  there is empty circle  $C_{p,q}$  through  $p$  and  $q$

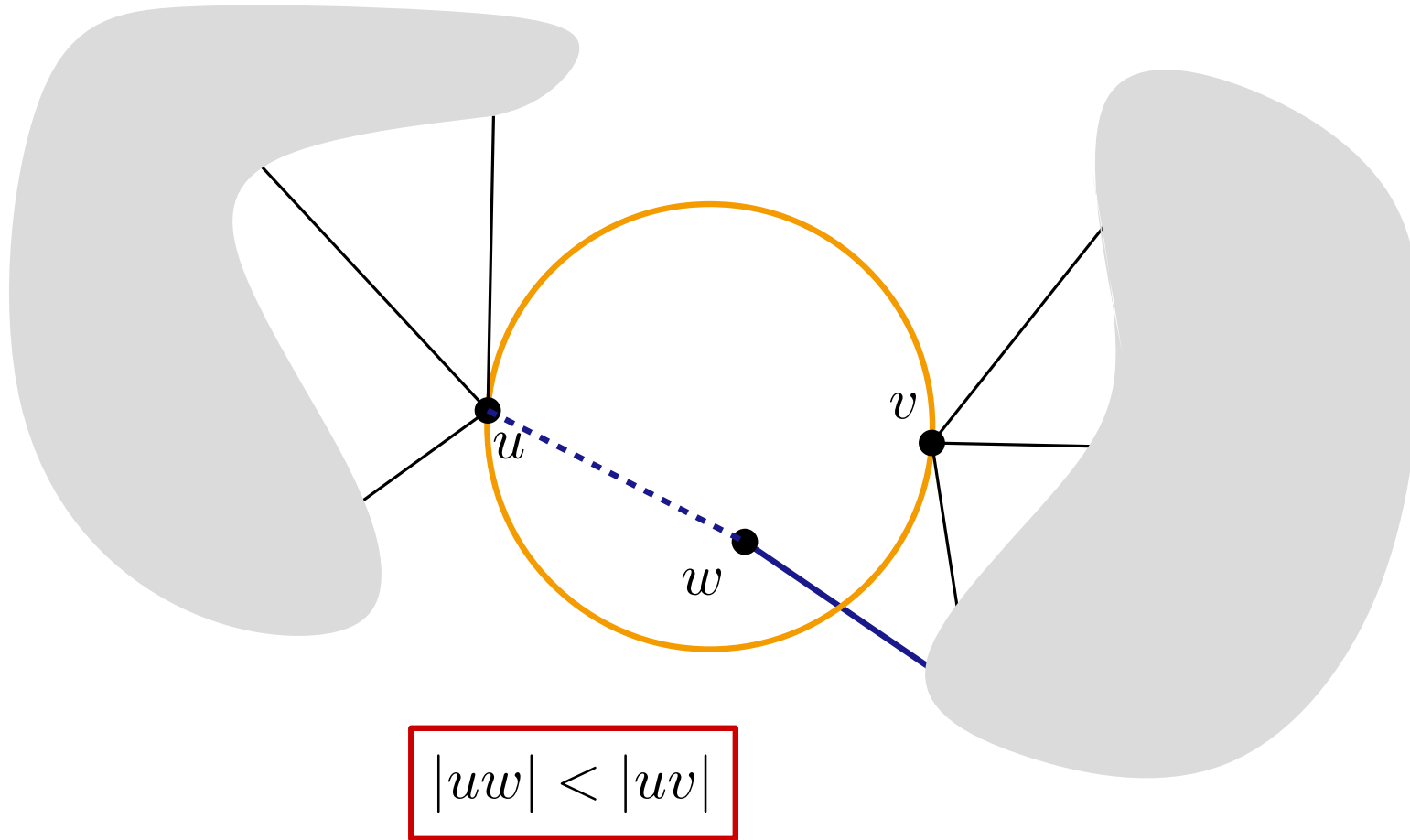


# Exercise 3



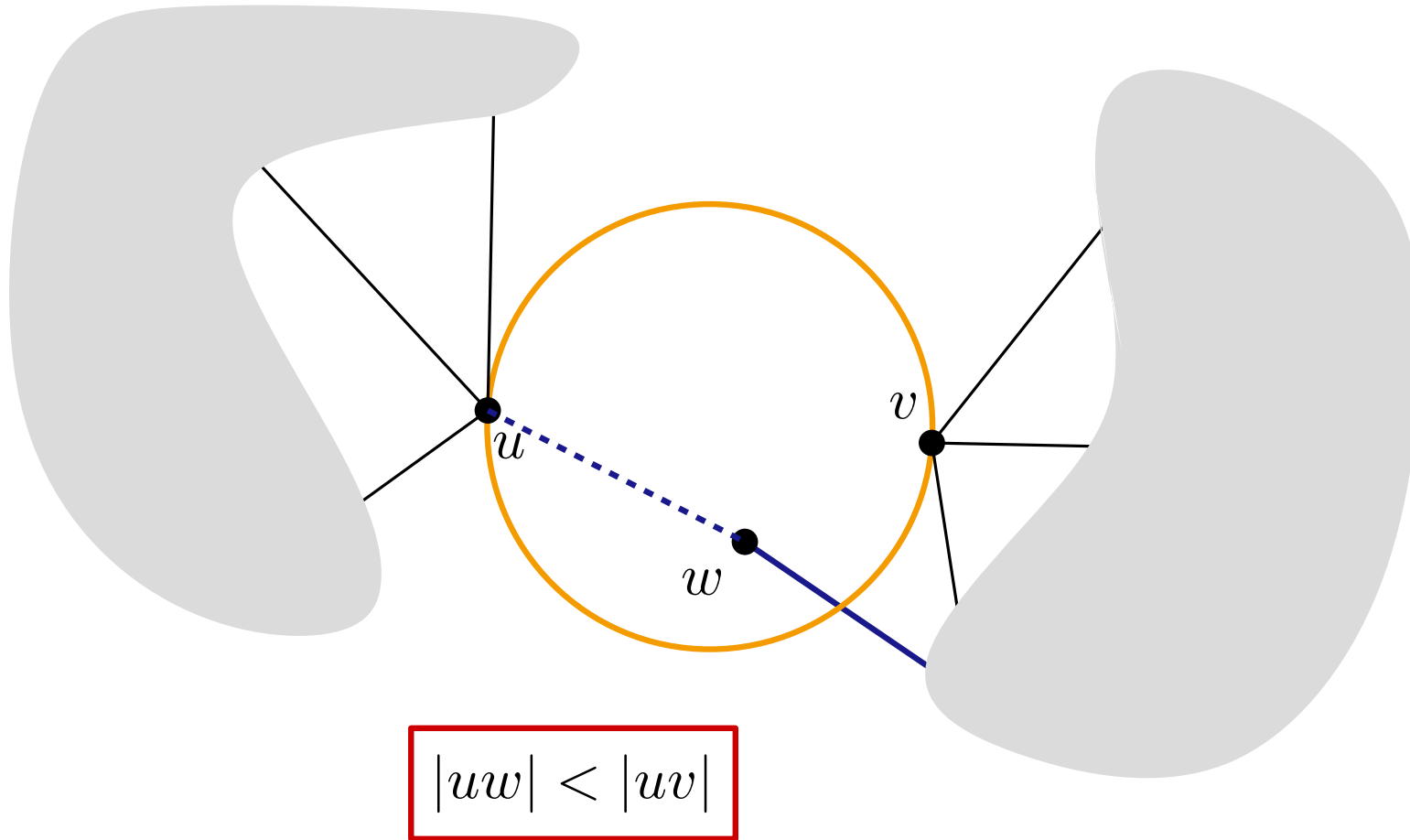
Edge  $pq$  in  $\mathcal{DG}(P) \Leftrightarrow$  there is empty circle  $C_{p,q}$  through  $p$  and  $q$

# Exercise 3



Edge  $pq$  in  $\mathcal{DG}(P) \Leftrightarrow$  there is empty circle  $C_{p,q}$  through  $p$  and  $q$

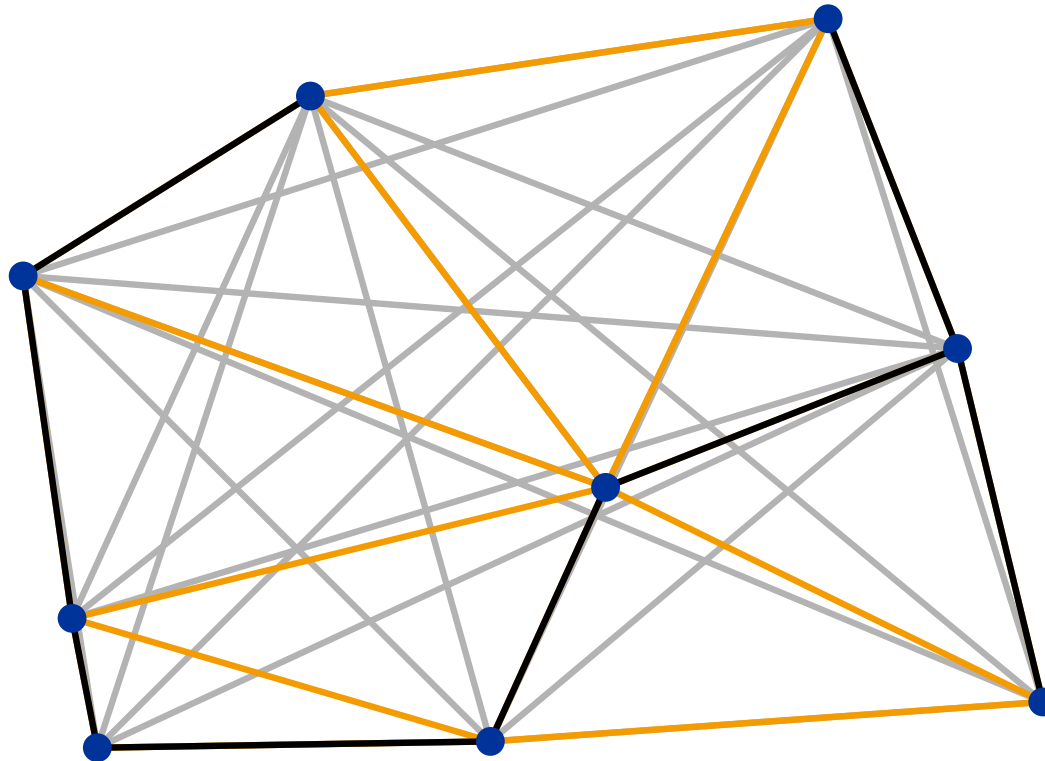
# Exercise 3



Edge  $pq$  in  $\mathcal{DG}(P) \Leftrightarrow$  there is empty circle  $C_{p,q}$  through  $p$  and  $q$

# Exercise 3

## Euclidean Minimum Spanning Tree



Computation of EMST in  $\mathcal{O}(n \log n)$ ?

# Exercise 4

- Gabriel Graph:  $p, q$  connected by edge, if circle  $C_{p,q}$  with diameter  $|pq|$  is empty.

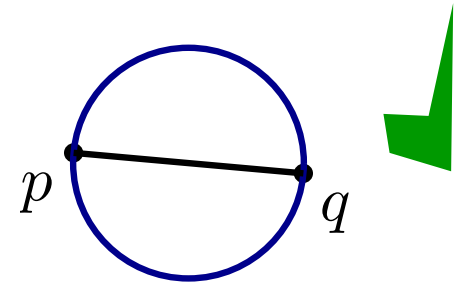
# Exercise 4

- Gabriel Graph:  $p, q$  connected by edge, if circle  $C_{p,q}$  with diameter  $|pq|$  is empty.



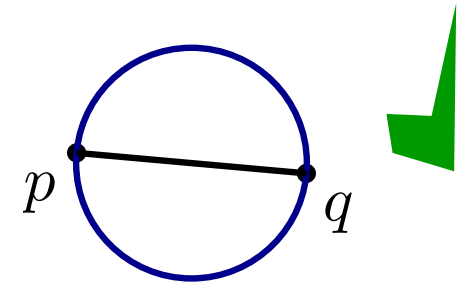
# Exercise 4

- Gabriel Graph:  $p, q$  connected by edge, if circle  $C_{p,q}$  with diameter  $|pq|$  is empty.



# Exercise 4

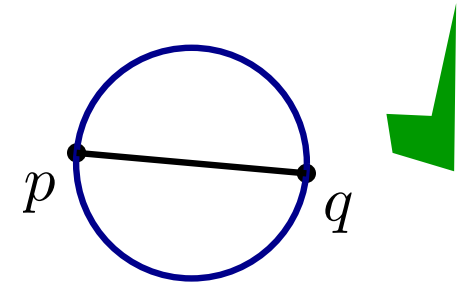
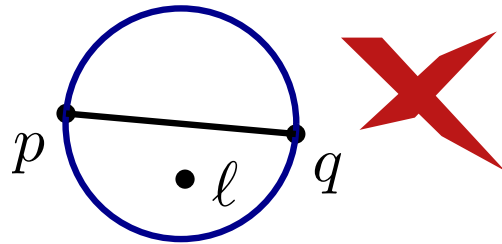
- Gabriel Graph:  $p, q$  connected by edge, if circle  $C_{p,q}$  with diameter  $|pq|$  is empty.





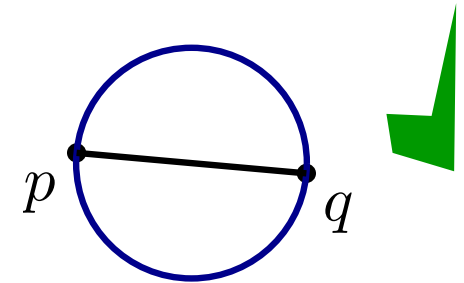
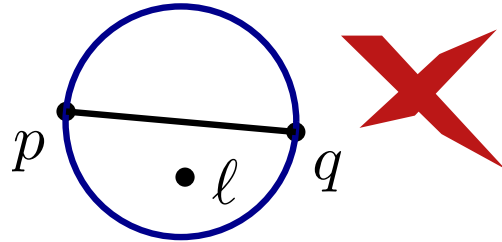
# Exercise 4

- Gabriel Graph:  $p, q$  connected by edge, if circle  $C_{p,q}$  with diameter  $|pq|$  is empty.



# Exercise 4

- Gabriel Graph:  $p, q$  connected by edge, if circle  $C_{p,q}$  with diameter  $|pq|$  is empty.

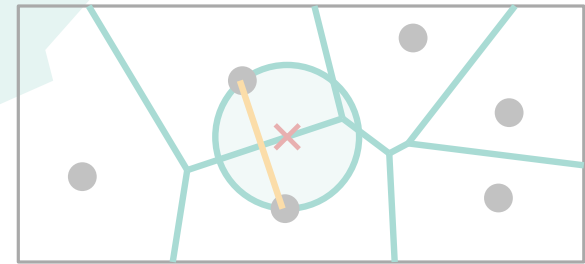
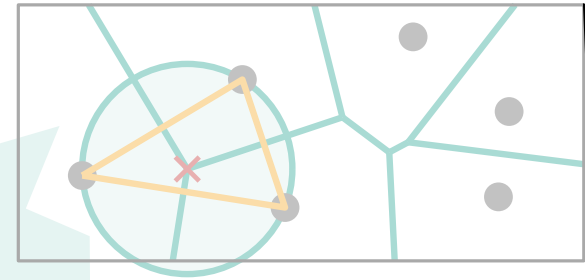


a) Show that Delaunay triangulation of  $P$  contains Gabriel graph of  $P$ .

# Characterization

## Theorem about Voronoi-Diagram:

- point  $q$  is a Voronoi-vertex  
 $\Leftrightarrow |C_P(q) \cap P| \geq 3$ ,
- bisector  $b(p_i, p_j)$  defines a Voronoi-edge  
 $\Leftrightarrow \exists q \in b(p_i, p_j)$  with  $C_P(q) \cap P = \{p_i, p_j\}$ .



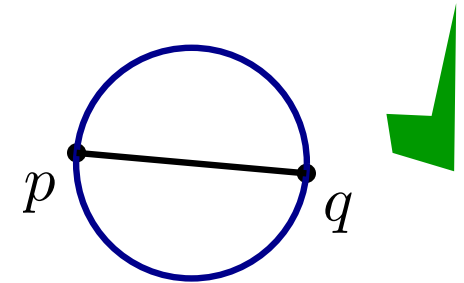
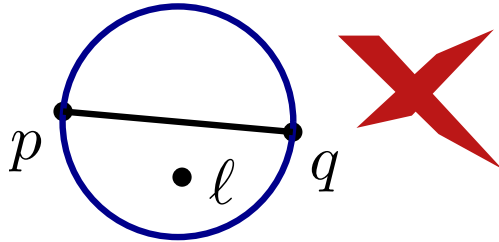
## Theorem 4: Let $P$ be a set of points.

- Points  $p, q, r$  are vertices of the same face of  $\mathcal{DG}(P) \Leftrightarrow$   
circle through  $p, q, r$  is empty
- Edge  $pq$  is in  $\mathcal{DG}(P) \Leftrightarrow$   
there is an empty circle  $C_{p,q}$  through  $p$  and  $q$

**Theorem 5:** Let  $P$  be a set of points and let  $\mathcal{T}$  be a triangulation of  $P$ .  $\mathcal{T}$  is Delaunay-Triangulation  
 $\Leftrightarrow$  the circumcircle of each triangle has an empty interior.

# Exercise 4

- Gabriel Graph:  $p, q$  connected by edge, if circle  $C_{p,q}$  with diameter  $|pq|$  is empty.

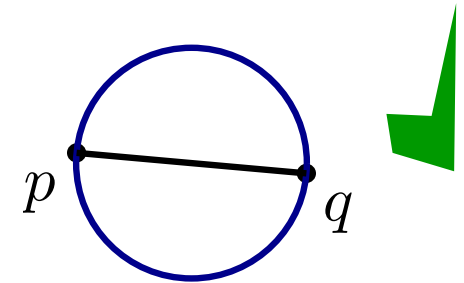
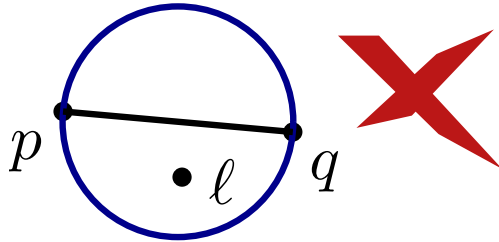


a) Show that Delaunay triangulation of  $P$  contains Gabriel graph of  $P$ .

Edge  $pq$  in  $\mathcal{DG}(P) \Leftrightarrow$  there is empty circles  $C_{p,q}$  through  $p$  and  $q$

# Exercise 4

- Gabriel Graph:  $p, q$  connected by edge, if circle  $C_{p,q}$  with diameter  $|pq|$  is empty.



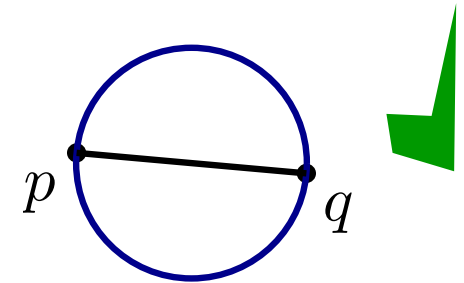
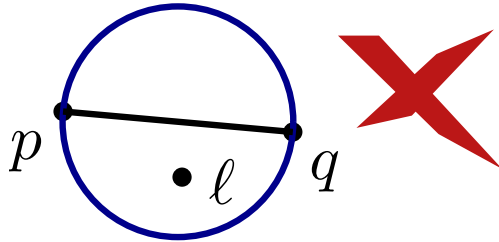
a) Show that Delaunay triangulation of  $P$  contains Gabriel graph of  $P$ .

b) Prove that  $p$  and  $q$  are adjacent in the Gabriel graph of  $P$  **iff** the Delaunay edge between  $p$  and  $q$  intersects its dual Voronoi edge.

Edge  $pq$  in  $\mathcal{DG}(P) \Leftrightarrow$  there is empty circles  $C_{p,q}$  through  $p$  and  $q$

# Exercise 4

- Gabriel Graph:  $p, q$  connected by edge, if circle  $C_{p,q}$  with diameter  $|pq|$  is empty.




a) Show that Delaunay triangulation of  $P$  contains Gabriel graph of  $P$ .

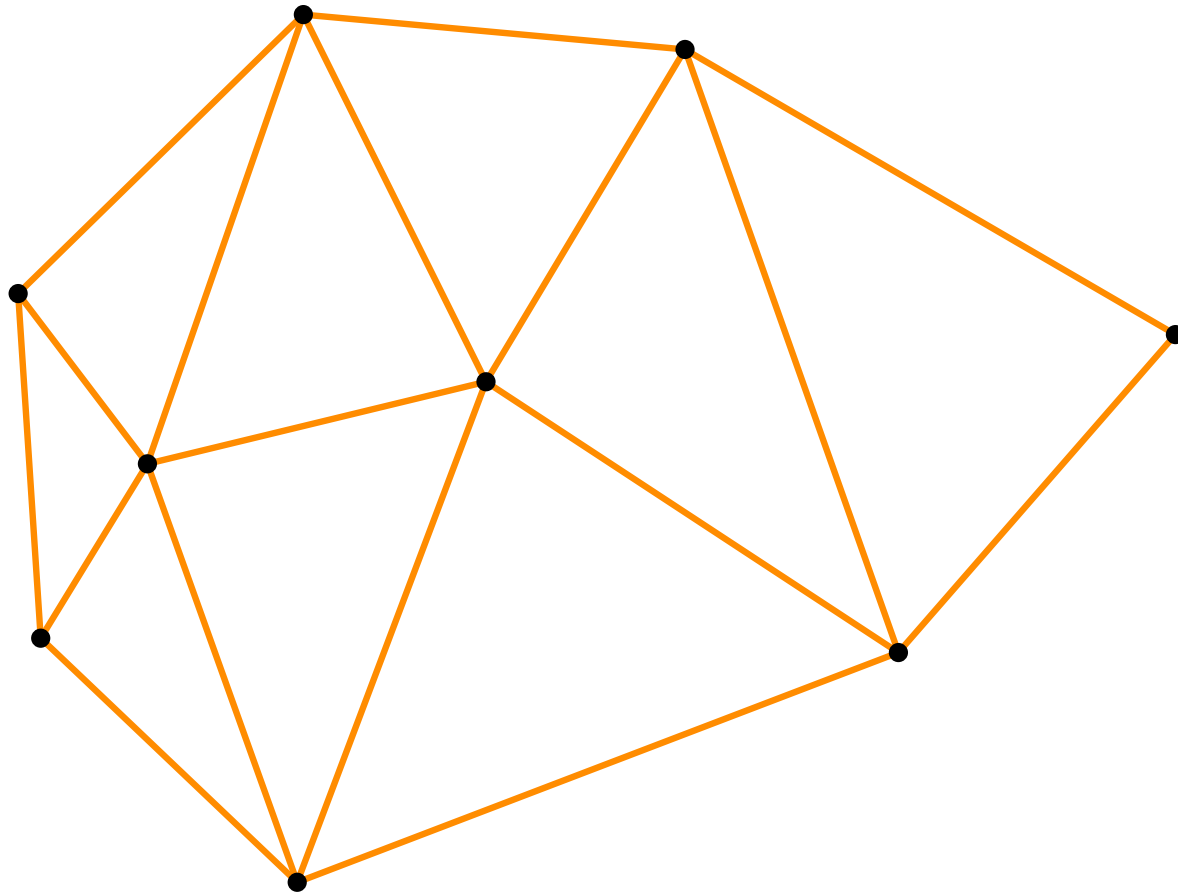
b) Prove that  $p$  and  $q$  are adjacent in the Gabriel graph of  $P$  **iff** the Delaunay edge between  $p$  and  $q$  intersects its dual Voronoi edge.

Edge  $pq$  in  $\mathcal{DG}(P) \Leftrightarrow$  there is empty circles  $C_{p,q}$  through  $p$  and  $q$

# Exercise 4

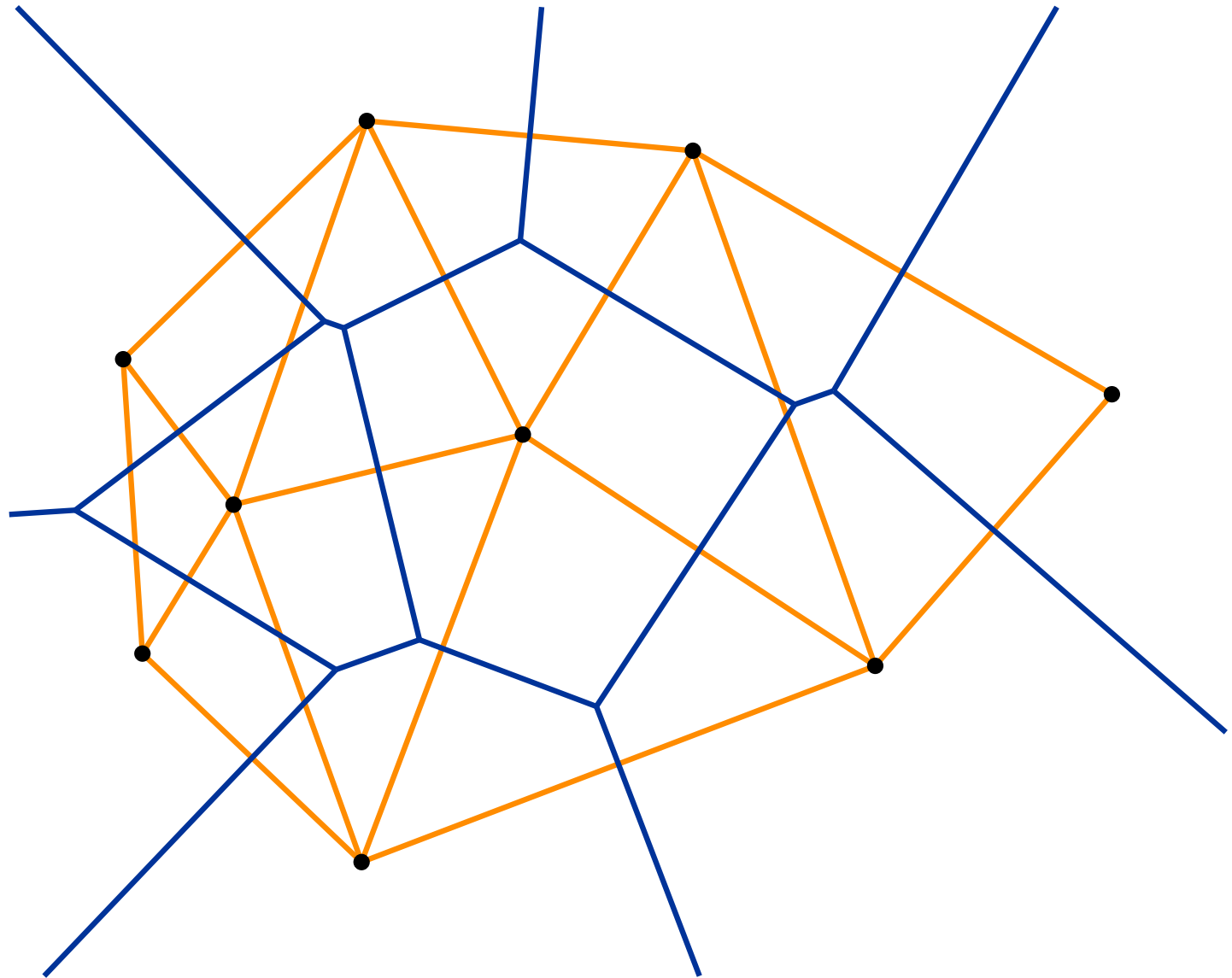


# Exercise 4





# Exercise 4



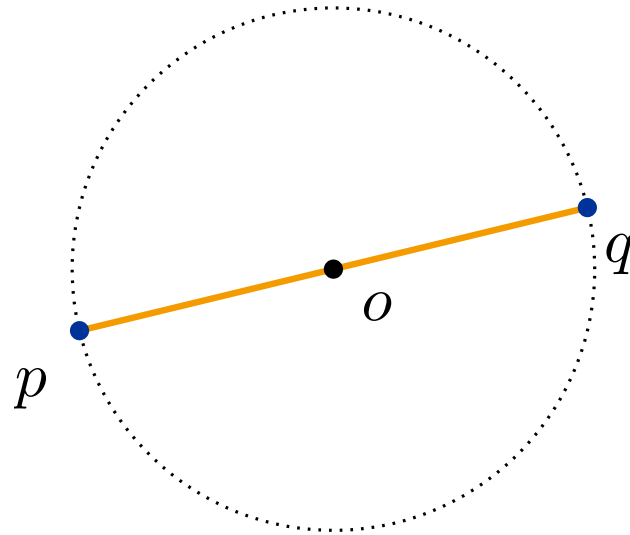
# Exercise 4

- $pq$  in Gabriel Graph



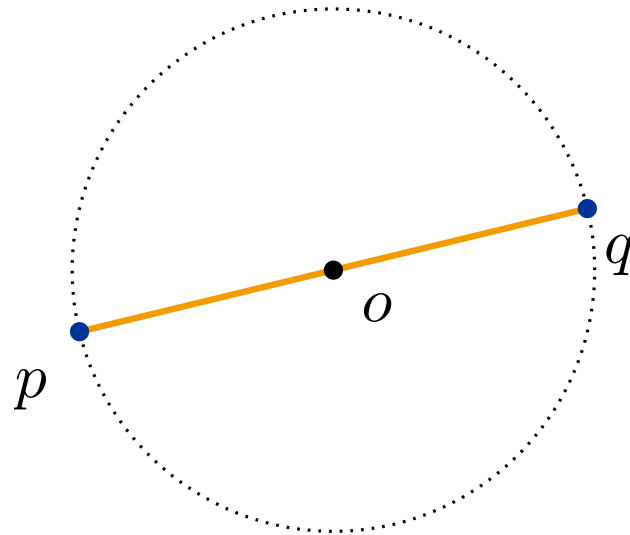
# Exercise 4

- $pq$  in Gabriel Graph



# Exercise 4

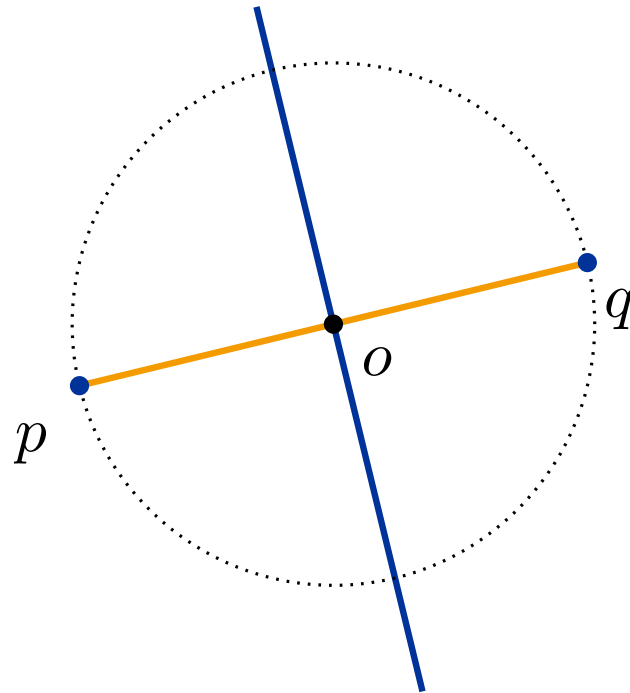
- $pq$  in Gabriel Graph



- $o$  is closer to  $p, q$  than to all other points in  $P$

# Exercise 4

- $pq$  in Gabriel Graph



- $o$  is closer to  $p, q$  than to all other points in  $P$   
 $\Rightarrow o$  lies on Voronoi-edge which bounds Voronoi cells of  $p$  and  $q$ .

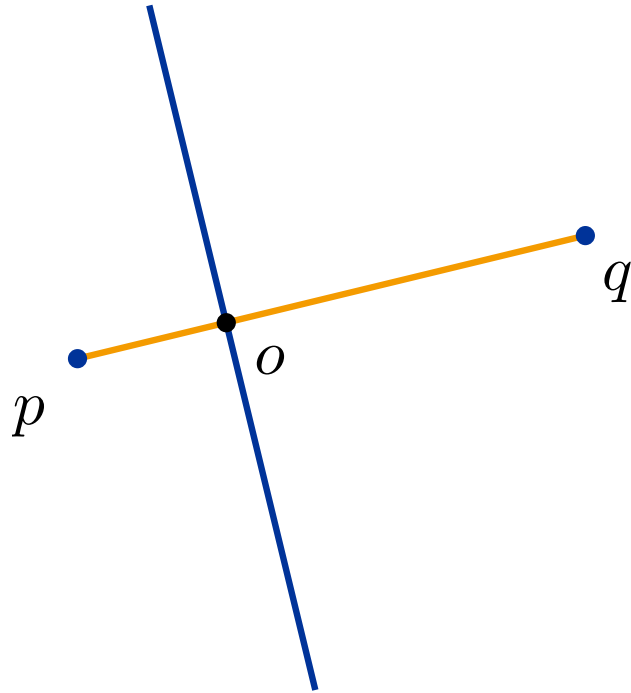
# Exercise 4

- $pq$  intersects dual Voronoi-edge



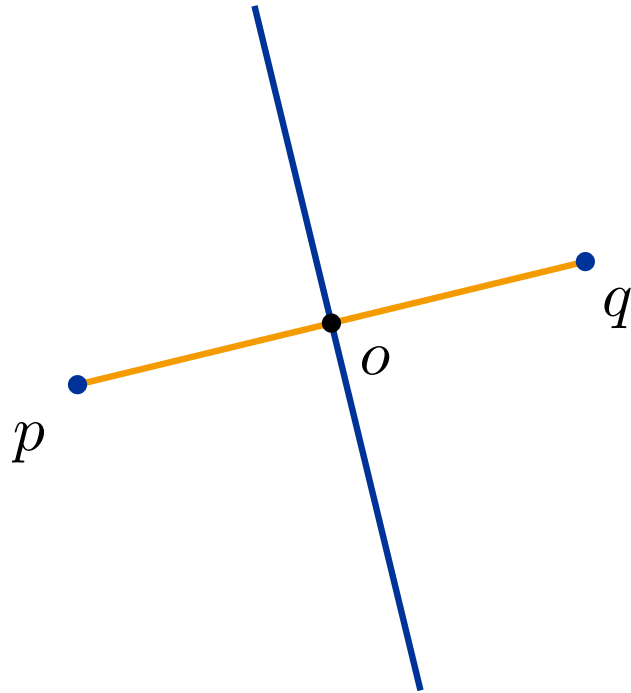
# Exercise 4

- $pq$  intersects dual Voronoi-edge



# Exercise 4

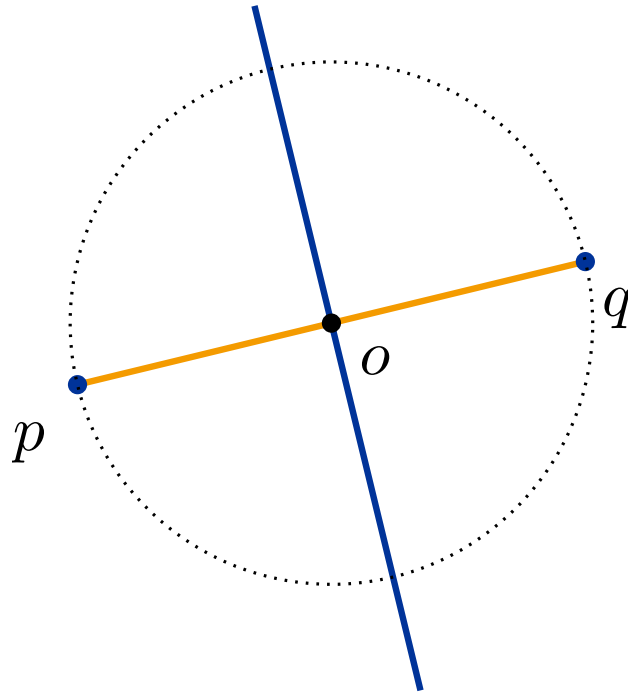
- $pq$  intersects dual Voronoi-edge





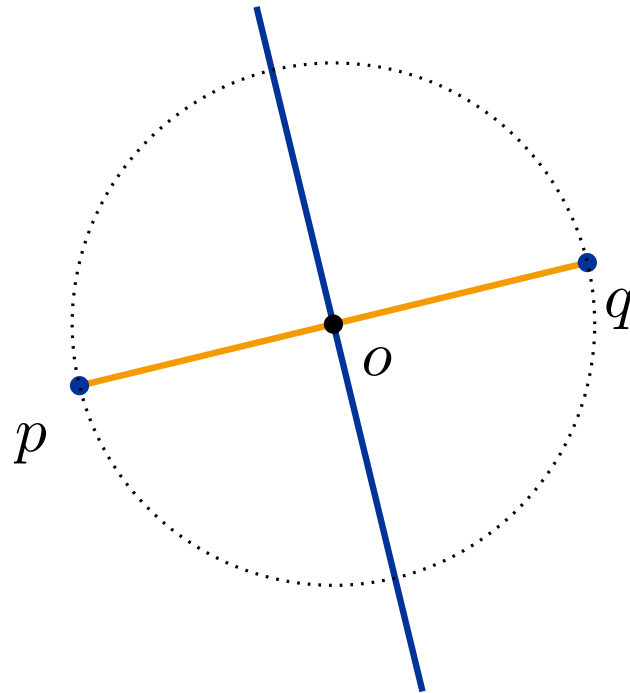
# Exercise 4

- $pq$  intersects dual Voronoi-edge



# Exercise 4

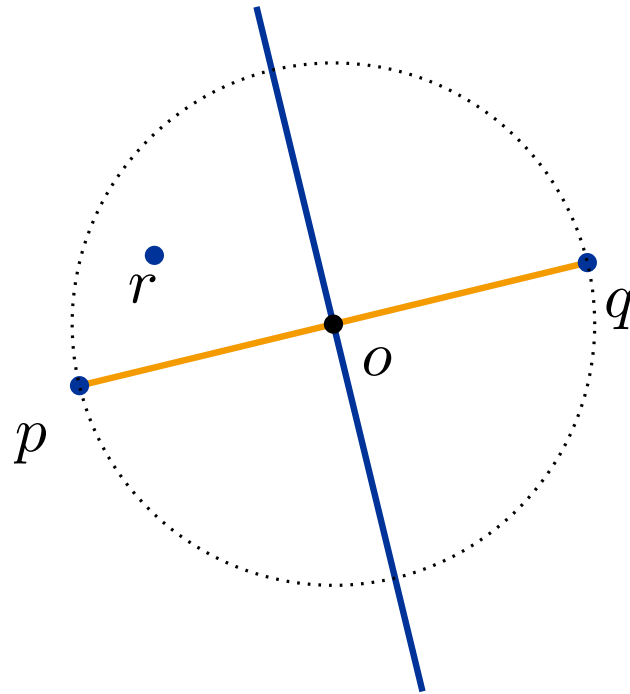
- $pq$  intersects dual Voronoi-edge



- Assume there is point  $r$  in  $C$ .

# Exercise 4

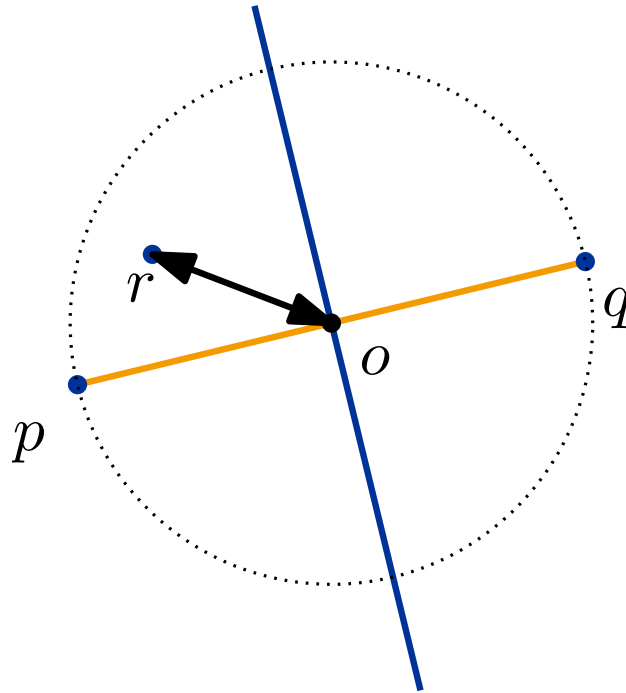
- $pq$  intersects dual Voronoi-edge



- Assume there is point  $r$  in  $C$ .

# Exercise 4

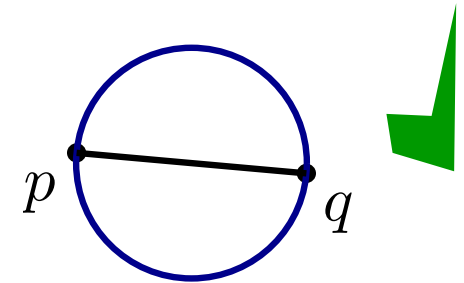
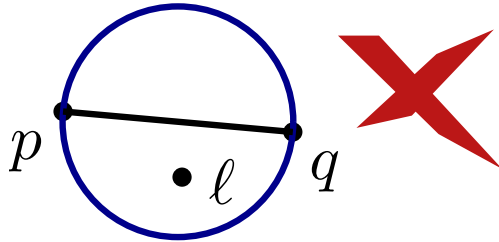
- $pq$  intersects dual Voronoi-edge



- Assume there is point  $r$  in  $C$ .
  - $\Rightarrow$  Distance between  $o$  and  $r$  less than  $|op|$  ( $|oq|$ )
  - $\Rightarrow$  Contradicts assumption that  $o$  lies on Voronoi-edge.

# Exercise 4

- Gabriel Graph:  $p, q$  connected by edge, if circle  $C_{p,q}$  with diameter  $|pq|$  is empty.

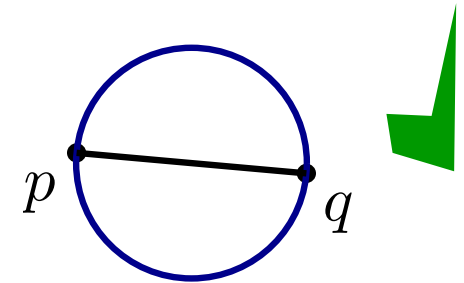
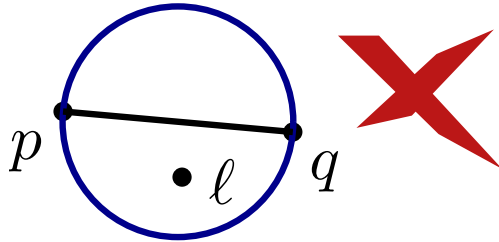


a) Show that Delaunay triangulation of  $P$  contains Gabriel graph of  $P$ .

b) Prove that  $p$  and  $q$  are adjacent in the Gabriel graph of  $P$  **iff** the Delaunay edge between  $p$  and  $q$  intersects its dual Voronoi edge.

# Exercise 4

- Gabriel Graph:  $p, q$  connected by edge, if circle  $C_{p,q}$  with diameter  $|pq|$  is empty.



- Show that Delaunay triangulation of  $P$  contains Gabriel graph of  $P$ .
- Prove that  $p$  and  $q$  are adjacent in the Gabriel graph of  $P$  **iff** the Delaunay edge between  $p$  and  $q$  intersects its dual Voronoi edge.
- $\mathcal{O}(n \log n)$  Algorithm for computing Gabriel-Graph.